

Name: _____ Class: _____ Date: _____




How can you sort these objects? Complete the chart. Explain how you organized the data.



Clothing	Toy	Instrument

Use the tally chart to answer the questions.

- a. Which insect did the fewest choose? _____
- b. Which insect did the most choose? _____
- c. How many more students chose butterfly than ant? _____ students

Insect	Tally
Ant 	I
Bee 	II
Butterfly 	III