





# MUDAHNYA BELAJAR PENGURANGAN



Hitunglah pengurangan angka di bawah ini dengan benar.



$2 - 1 = 1$



$4 - 3 = \square$




$5 - 3 = \square$



$7 - 4 = \square$



$9 - 5 = \square$



$8 - 2 = \square$



$7 - 1 = \square$



$10 - 2 = \square$



$15 - 5 = \square$

Nama: \_\_\_\_\_

Nilai: \_\_\_\_\_ Paraf: \_\_\_\_\_

Kelas: \_\_\_\_\_ Absen No: \_\_\_\_\_

Penilaian: ☆ ☆ ☆ ☆ ☆