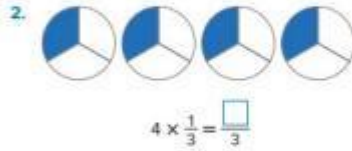
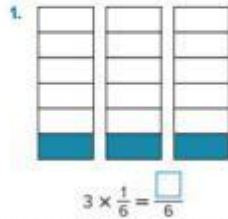
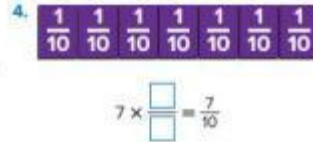
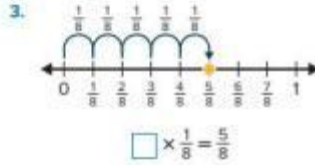


Name \_\_\_\_\_

What is the product?



What is the missing factor?



How can you express the fraction as a multiple of a unit fraction?

5.  $\frac{7}{3} = \square \times \frac{\square}{\square}$

6.  $\frac{5}{2} = \square \times \frac{\square}{\square}$

What is the product?

7.  $8 \times \frac{1}{4} = \frac{\square}{\square}$

8.  $9 \times \frac{1}{7} = \frac{\square}{\square}$

Explain how you found the product.

9.  $5 \times \frac{1}{3} = \frac{\square}{\square}$

10.  $6 \times \frac{1}{5} = \frac{\square}{\square}$