


Nama: _____


Kelas: _____

PENJUMLAHAN

Hitunglah jumlah berdasarkan gambar dan tuliskan jawabannya!




+




=

...




+




=

...




+




=

...



+



=

...

Nama: _____

Kelas: _____

PENGURANGAN

Hitunglah jumlah berdasarkan gambar dan tuliskan jawabannya!

Contoh: 

$$6 - 2 = 4$$



$$\square - \square = \square$$



$$\square - \square = \square$$



$$\square - \square = \square$$