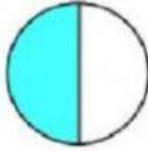
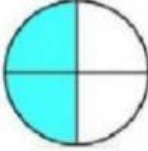
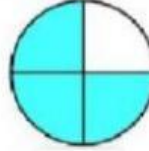
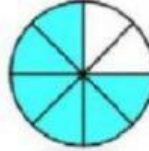


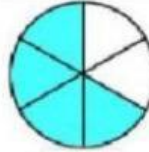
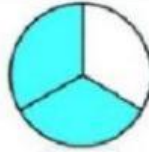
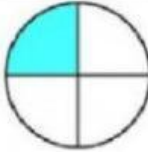
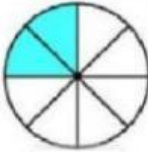
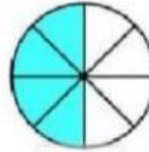
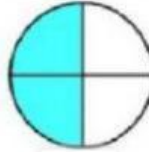
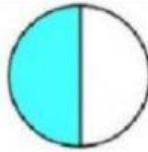
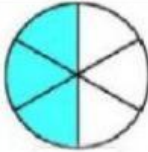
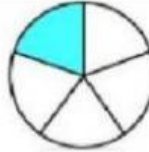
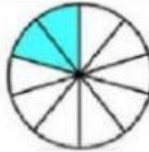

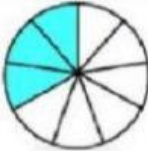
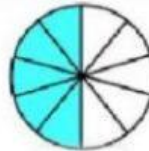



השוואת שברים

1. השלימו את המספרים המתאימים לציור.

1)  $\frac{1}{2} =$  4	6)  4 =  8
2)  $\frac{1}{3} =$  6	7)  6 =  3
3)  $\frac{1}{4} =$  8	8)  8 =  4
4)  $\frac{1}{2} =$  6	9)  5 =  10
5)  $\frac{1}{3} =$  9	10)  10 =  2

2. הרחיבו את השברים הבאים פי 5:

$$\frac{2}{3} = \frac{\quad}{\quad}$$

$$\frac{3}{4} = \frac{\quad}{\quad}$$

$$\frac{5}{9} = \frac{\quad}{\quad}$$