

# HOW DO YOU COUNT MOVING PEOPLE?

## • VOCABULARY

<b>Absolute population</b>	Población absoluta (total de personas)
<b>Natural increase</b>	Crecimiento natural (natalidad menos mortalidad)
<b>Birth rate</b>	Tasa de natalidad
<b>Death rate</b>	Tasa de mortalidad
<b>Population density</b>	Densidad de población
<b>Immigrant</b>	Inmigrante (persona que llega)
<b>Emigrant</b>	Emigrante (persona que se va)
<b>Actual increase</b>	Crecimiento real (incluye la migración)
<b>Urban areas</b>	Zonas urbanas (ciudades)
<b>Rural areas</b>	Zonas rurales (pueblos/campo)
<b>Inhabitants</b>	Habitantes

## • MATCH (Une)

<b>Absolute population</b>	Birth rate - death rate
<b>Natural increase</b>	a <b>person</b> who <b>moves into</b> an area
<b>Population density</b>	Absolute population/ square km
<b>Immigrant</b>	total number of people living in an area
<b>Emigrant</b>	Natural increase + number of immigrants - number of emigrants
<b>Actual increase</b>	a <b>person</b> who <b>moves away</b> from an area

• **MATCH (Une)**

INCREASE
DECREASE
COAST
INLAND
MOST
FEW
URBAN
RURAL

Urbano
Interior
Pocos
Rural
Costa
Disminuir
Aumentar
Mayoría

• **CHOOSE THE CORRECT ONE (Elige la correcta)**

The absolute population of Spain has \_\_\_\_\_ almost every year but not everywhere has experienced equal growth.

Most people choose to live near the \_\_\_\_\_ or capital cities.

Most of Spain is rural; \_\_\_\_\_ people live there.

Most people live in \_\_\_\_\_ areas.

• **FILL IN THE GAPS WITH THE CORRECT PAIR (Completa con el par de opuestos adecuado)**

**Most / Few**

**Coast/ Inland**

**Decreased/ Increased**

1. The population of Spain has \_\_\_\_\_ in the cities but it has \_\_\_\_\_ in some rural villages.
2. In Spain, \_\_\_\_\_ people live in urban areas, and very \_\_\_\_\_ people live in the "empty" inland.
3. Madrid is \_\_\_\_\_, but Valencia is on the \_\_\_\_\_.

• **TRUE OR FALSE? (Verdadero o Falso)**

1. \_\_\_\_ Natural increase is the difference between birth rate and death rate.
2. \_\_\_\_ Most people in Spain live in rural areas.
3. \_\_\_\_ In 2020, Spain had a population density of 92 inhabitants per km<sup>2</sup>.
4. \_\_\_\_ Actual increase only counts births and deaths.
5. \_\_\_\_ Population density is the same all over Spain.

• **FILL IN THE BLANKS (Completar los huecos)**

Urban                  Natural                  Coast                  Density                  Absolute

1. To calculate the \_\_\_\_\_ population, you count every person in an area.
2. Birth rate - Death rate = \_\_\_\_\_ increase.
3. In Spain, most people choose to live near the \_\_\_\_\_ or in big cities.
4. \_\_\_\_\_ areas (cities) have more people than rural areas.
5. \_\_\_\_\_ is calculated by dividing the absolute population by the square kilometres (km<sup>2</sup>).

• **COMPLETE THE WORDS:**

- a) The total number of people living in an area: **a** \_\_\_\_\_ **p** \_\_\_\_\_
- b) The study of human populations: **d** \_\_\_\_\_
- c) The number of births minus the number of deaths: **n** \_\_\_\_\_ **i** \_\_\_\_\_
- d) The movement of people into a country: **i** \_\_\_\_\_
- e) In a city: **u** \_\_\_\_\_

• **CHOOSE THE CORRECT ONE (Elige la correcta)**

France and Germany      Barcelona and Madrid      Latin America

- 1) During the first half of the 20th century, many Spaniards emigrated to \_\_\_\_\_.
- 2) In the 1950s and 1960s, many Spaniards emigrated to \_\_\_\_\_.  
The same happened in 2012.
- 3) Since the 1960s, there has been a mass migration of people from rural to urban areas such as \_\_\_\_\_.

• **CHOOSE THE CORRECT ONE (Elige la correcta)**

"This is the total number of people living in an area."

"This is the average number of people who live on each square kilometre of land."

"This is the difference between the number of births and number of deaths."





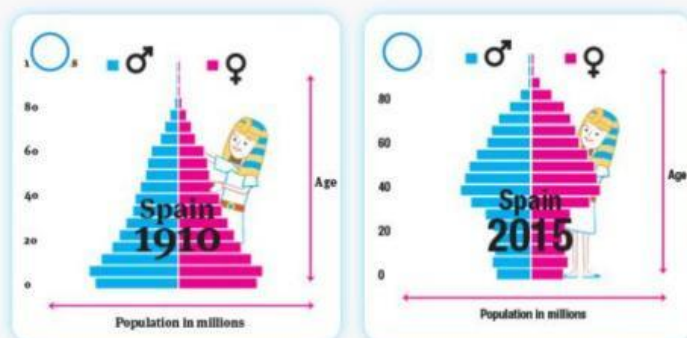
- a) ☐ absolute population
- b) ☐ population density
- c) ☐ natural increase

"An \_\_\_\_\_ is a person who moves into an área and \_\_\_\_\_  
is a person who moves out of an area."

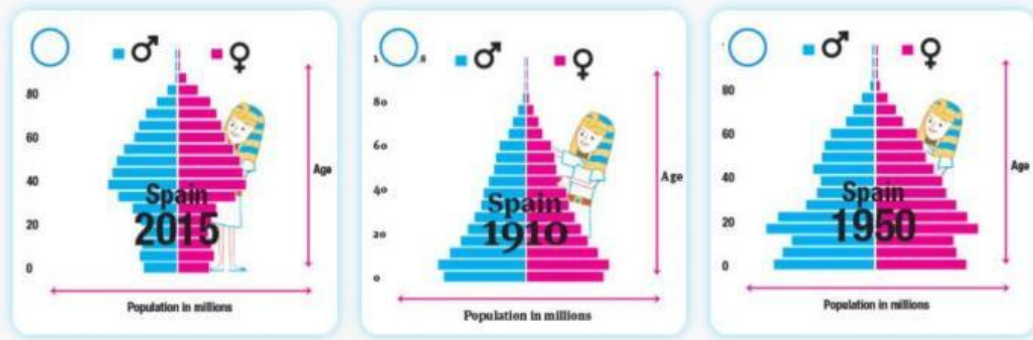
"Natural increase + number of immigrants - number of emigrants = \_\_\_\_\_"

- **TRUE OR FALSE? (Verdadero o Falso)**
- Generally, provinces on the coast have a higher population density than regions that are inland.
- One reason why people emigrate is to escape famine and war.
- People emigrate because there are too many employment opportunities in their country.
- People are constantly emigrating and immigrating.
- **CHOOSE THE CORRECT ONE (Elige la correcta)**

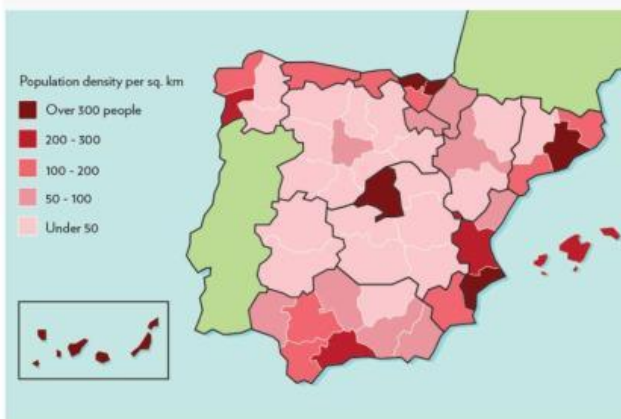
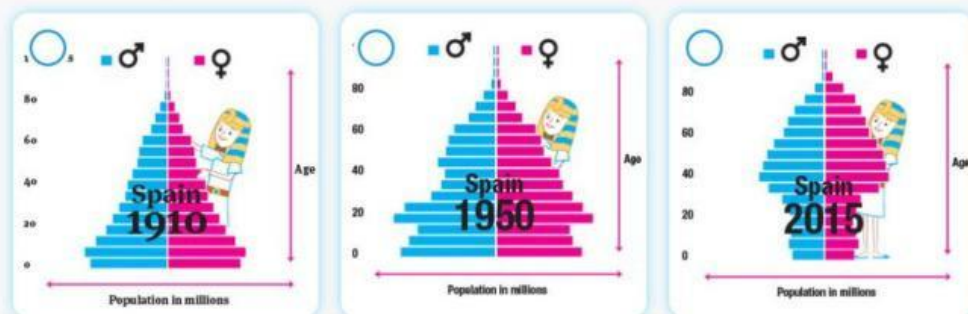
Choose the pyramid with a high birth rate and a low life expectancy.



Choose the pyramid with the lowest birth rate.



Which pyramid has a higher proportion of the population aged between 30 and 50?



Which autonomous community has the highest population density?

- ☐ Madrid
- ☐ Extremadura
- ☐ Castilla y León
- ☐ Castilla-La Mancha

Which autonomous community has the lowest population density?

- ☐ Galicia
- ☐ Andalucía
- ☐ Extremadura
- ☐ Comunidad Valenciana