
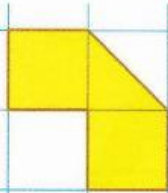


1 Which shapes have an area of 2cm^2 ?

(a)



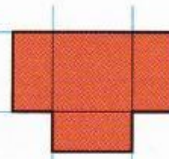
(b)



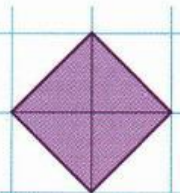
(c)



(d)

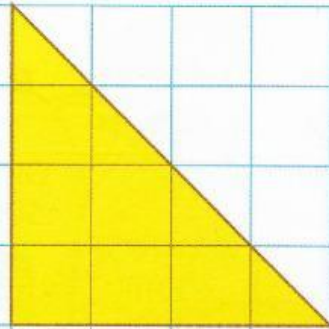


(e)




2 Find the area of each shape in **square centimetres**.

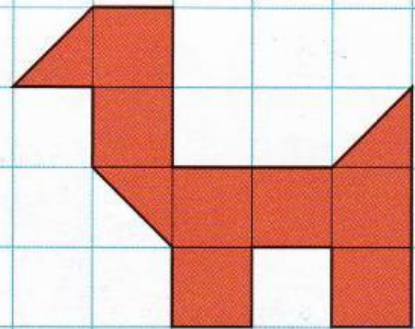
(a)



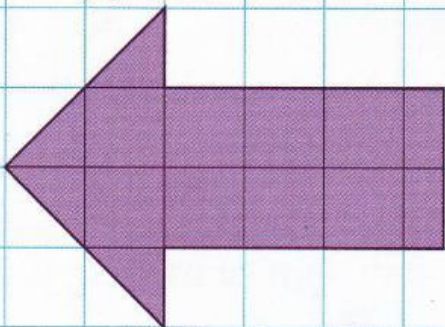
(b)



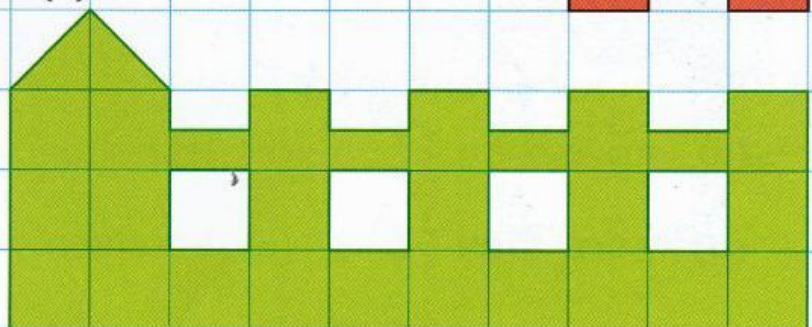
(c)



(d)



(e)



3 (a) Draw a shape with an area of $7\frac{1}{2}\text{cm}^2$.

(b) Draw three different shapes each with an area of $5\frac{1}{2}\text{cm}^2$.

4 Find different ways of colouring **half** the area of a square like this.

