
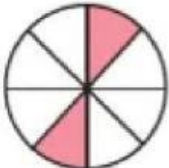
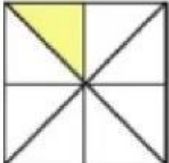
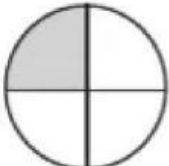


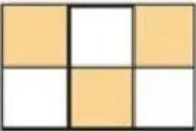
**REALIZA LAS SIGUIENTES SUMAS DE FRACCIONES Y ESCRIBE
COMO SE LEE EL RESULTADO.**



 $\frac{1}{4} + \frac{2}{4} =$

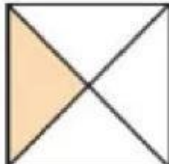

 $\frac{2}{8} + \frac{3}{8} =$


 $\frac{1}{8} + \frac{2}{8} =$


 $\frac{1}{4} + \frac{1}{4} =$


 $\frac{3}{6} + \frac{1}{6} =$


 $\frac{1}{3} + \frac{1}{3} =$


 $\frac{1}{4} + \frac{2}{4} =$
