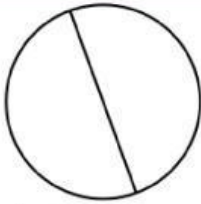


## Circle Worksheet

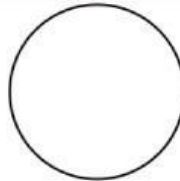
1 a.



$$d = 3.2 \text{ yd}$$

Calculate the circumference of the circle.

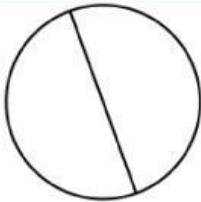
1 b.



$$d = 6.7 \text{ in}$$

Calculate the circumference of the circle.


2 a.



$$d = 7.2 \text{ cm}$$

Calculate the circumference of the circle.


2 b.



$$d = 4.8 \text{ m}$$

Calculate the circumference of the circle.

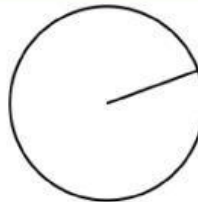
3 a.



$$d = 3.9 \text{ cm}$$

Calculate the circumference of the circle.

3 b.



$$r = 2.7 \text{ mm}$$

Calculate the circumference of the circle.