



DESIMAL DAN PERSEN


- Perhatikan gambar yang menyatakan pecahan berikut!
- Tuliskan pecahan dari gambar tersebut lalu ubahlah menjadi bentuk desimal dan persen!




$\frac{\quad}{\quad} = \frac{\quad}{\quad} = \%$



$\frac{\quad}{\quad} = \frac{\quad}{\quad} = \%$




$\frac{\quad}{\quad} = \frac{\quad}{\quad} = \%$




$\frac{\quad}{\quad} = \frac{\quad}{\quad} = \%$

3



$\frac{\quad}{\quad} = \frac{\quad}{\quad} = \%$

6



$\frac{\quad}{\quad} = \frac{\quad}{\quad} = \%$