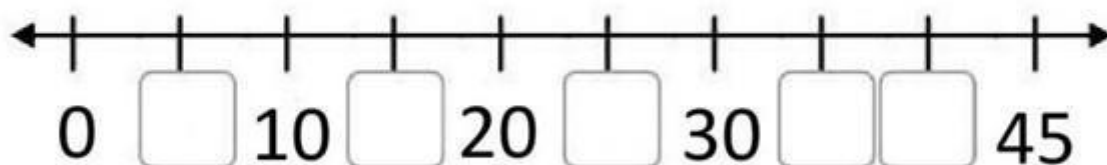
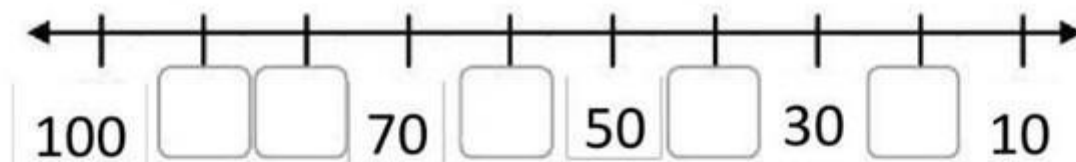
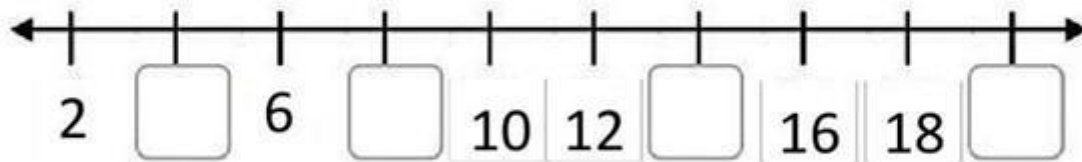

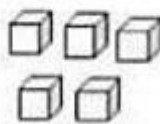





Secuenciar números en la recta numérica, registrando el dígito que falta en los espacios dispuestos.





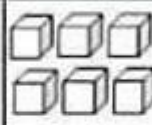
Identificar decenas y unidades, registrando la cantidad según corresponda en el espacio asignado.


Decenas	Unidades	Decenas	Unidades
			


= 


Decenas	Unidades	Decenas	Unidades
			

= 

Decenas	Unidades	Decenas	Unidades
			

= 

Decenas	Unidades	Decenas	Unidades
			

= 

Identificar mayor, menor o igual colocando el signo correspondiente entre los números indicados.

23  32

70  80

71  71

43  34

51  32

51  71

61  88

80  80

36  27

78  28

Calcular sumas y restas simples, registrando los resultados y diferencias en los espacios correspondientes.

$$\begin{array}{r} + 51 \\ + 32 \\ \hline \end{array}$$

$$\begin{array}{r} + 12 \\ + 32 \\ \hline \end{array}$$

$$\begin{array}{r} + 72 \\ + 21 \\ \hline \end{array}$$

$$\begin{array}{r} + 12 \\ + 53 \\ \hline \end{array}$$

$$\begin{array}{r} + 31 \\ + 12 \\ \hline \end{array}$$

$$\begin{array}{r} + 41 \\ + 26 \\ \hline \end{array}$$

$$\begin{array}{r} + 32 \\ + 32 \\ \hline \end{array}$$

$$\begin{array}{r} + 35 \\ + 12 \\ \hline \end{array}$$

$$\begin{array}{r} 17 \\ - 10 \\ \hline \end{array}$$

$$\begin{array}{r} 18 \\ - 6 \\ \hline \end{array}$$

$$\begin{array}{r} 27 \\ - 12 \\ \hline \end{array}$$

$$\begin{array}{r} 19 \\ - 5 \\ \hline \end{array}$$

$$\begin{array}{r} 28 \\ - 12 \\ \hline \end{array}$$

$$\begin{array}{r} 45 \\ - 22 \\ \hline \end{array}$$

$$\begin{array}{r} 36 \\ - 14 \\ \hline \end{array}$$

$$\begin{array}{r} 15 \\ - 4 \\ \hline \end{array}$$