
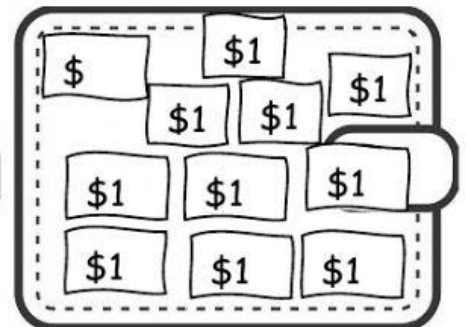

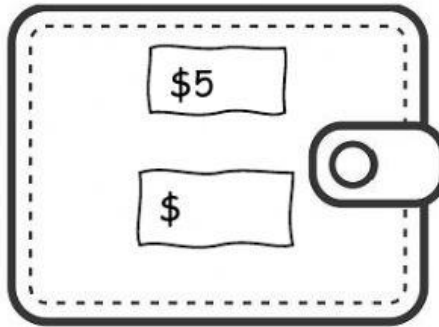
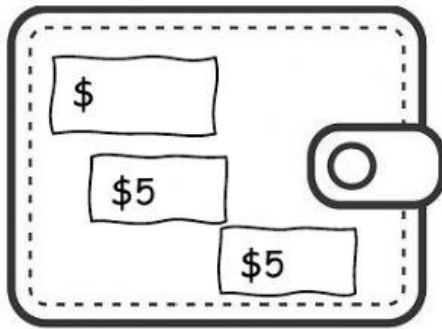


Friday 19th March, 2021

Term 2

Weekly Test 9- Mathematics

A. Fill in the missing money to make **\$15** in each wallet.




B. Solve the following word problems. Write your number statements where necessary.

1. Ché wants to buy McDonald's for \$15.

He has \$13.

How much more money he needs to make \$15?

$$\$13 + \$______ = \$15$$



2. Zahirah had \$15.

She bought lunch for \$8.

How much money was left?



3. Micah bought a hotdog for \$8, drink for \$5 and a pack of chips for \$2.

How much money did he spend in all?




4. Kayla had \$15.

She bought a snack for \$3.


How much money was left?




C. Look at the three students below and answer the questions.



Tom




Ben



Jane

1. Which student is the shortest? _____
2. Which student is the tallest? _____
3. Ben is _____ than Jane.
4. Tom is _____ than Ben.

D. Look at the pictures and select the correct answer.



1. The yellow bird is flying _____ than the blue bird.
2. The red bird is flying the _____.
3. The blue bird is flying _____.