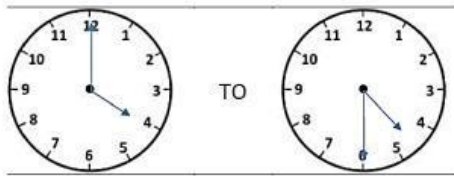


NAME: _____ DATE: _____ LEVEL: _____

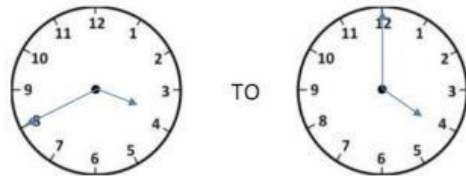
Elapsed Time

How much time has elapsed between the first and second time?

First Time	Second Time	Elapsed Time
7:05 p.m.	11:55 p.m.	4 hours, 50 minutes.
12:55 a.m.	4:50 a.m.	
7:15 a.m.	8:55 a.m.	
10:35 a.m.	12:50 p.m.	



TO



TO

a) 09:40 and 10:22



b) 07:35 and 09:14



d) 13:09 and 16:27

$$\begin{array}{r} 16:27 \\ - 13:09 \\ \hline 3:18 \end{array}$$

f) 11:14 and 22:58


$$\begin{array}{r} 22:58 \\ - 11:14 \\ \hline 11:44 \end{array}$$



What time will it be in 5 hours 30 minutes?

It's _____

It's _____



What time was it 4 hours 30 minutes ago?

It's _____

It's _____