



NOME:

QUEBRA-CABEÇA COM DIVISÃO



1 Resolva as divisões do final da página. Depois, recorte as figuras de cada quadro e cole-as sobre o resultado de cada operação. Ao final, você terá um lindo quebra-cabeça montado.

62	21	27	11
24	70	40	84






$168 : 2 =$	$120 : 3 =$	$140 : 2 =$	$74 : 3 =$

$78 : 7 =$	$84 : 4 =$	$124 : 2 =$	$81 : 3 =$



Resolva as operações:

			$\begin{array}{r} 75 \\ \times 3 \\ \hline \end{array}$
<div><input type="text"/> $\begin{array}{r} 607 \\ \times 2 \\ \hline \end{array}$<div><input type="text"/></div></div>	<div><input type="text"/> $\begin{array}{r} 316 \\ \times 3 \\ \hline \end{array}$<div><input type="text"/></div></div>	<div><input type="text"/> $\begin{array}{r} 162 \\ \times 4 \\ \hline \end{array}$<div><input type="text"/></div></div>	<div><input type="text"/> $\begin{array}{r} 902 \\ \times 5 \\ \hline \end{array}$<div><input type="text"/></div></div>
<div><input type="text"/><input type="text"/> $\begin{array}{r} 823 \\ \times 6 \\ \hline \end{array}$<div><input type="text"/></div></div>	<div><input type="text"/> $\begin{array}{r} 605 \\ \times 7 \\ \hline \end{array}$<div><input type="text"/></div></div>	<div><input type="text"/> $\begin{array}{r} 241 \\ \times 8 \\ \hline \end{array}$<div><input type="text"/></div></div>	<div><input type="text"/> $\begin{array}{r} 304 \\ \times 9 \\ \hline \end{array}$<div><input type="text"/></div></div>
<div><input type="text"/> $\begin{array}{r} 174 \\ \times 2 \\ \hline \end{array}$<div><input type="text"/></div></div>	<div><input type="text"/><input type="text"/> $\begin{array}{r} 345 \\ \times 3 \\ \hline \end{array}$<div><input type="text"/></div></div>	<div><input type="text"/> $\begin{array}{r} 190 \\ \times 4 \\ \hline \end{array}$<div><input type="text"/></div></div>	<div><input type="text"/> $\begin{array}{r} 416 \\ \times 5 \\ \hline \end{array}$<div><input type="text"/></div></div>
<div><input type="text"/><input type="text"/> $\begin{array}{r} 537 \\ \times 6 \\ \hline \end{array}$<div><input type="text"/></div></div>	<div><input type="text"/><input type="text"/> $\begin{array}{r} 236 \\ \times 7 \\ \hline \end{array}$<div><input type="text"/></div></div>	<div><input type="text"/><input type="text"/> $\begin{array}{r} 452 \\ \times 8 \\ \hline \end{array}$<div><input type="text"/></div></div>	<div><input type="text"/><input type="text"/> $\begin{array}{r} 635 \\ \times 9 \\ \hline \end{array}$<div><input type="text"/></div></div>