



Exercise 3 Write the full name of each of these major or minor intervals above the tonic.

A major

a 
 major 3rd

B minor

b 

A \flat major

c 


C# minor

d 

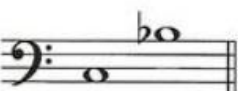
Remember! 4ths, 5ths and 8ves are perfect intervals. All other intervals can be major or minor.


Exercise 4 Circle the type of each interval. The lower note in each is the tonic.

a  perfect major minor

b  perfect major minor

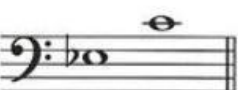
c  perfect major minor

d  perfect major minor


e  perfect major minor

f  perfect major minor

g  perfect major minor

h  perfect major minor

i  perfect major minor

j  perfect major minor