








Name: \_\_\_\_\_

Date: \_\_\_\_\_

Mathematics

Measurement-Weight

**Use the food and their weight to answer the questions below.**

carrot	pumpkin	yam	cabbage	potato
				
10 kg	25 kg	12 kg	8 kg	6 kg

1. The heaviest item is the \_\_\_\_\_.
2. The lightest item is the \_\_\_\_\_.
3. What is the weight of the potato, carrot and cabbage altogether?  
\_\_\_\_\_.
4. If the carrot was 7 kg heavier what would be its weight?  
\_\_\_\_\_.
5. If Tim bought the yam and pumpkin what would be the total weight of the items? \_\_\_\_\_
6. The yam is heavier than the \_\_\_\_\_, \_\_\_\_\_ and \_\_\_\_\_ but lighter than the \_\_\_\_\_.
7. If Kim bought 2 cabbages what would be the total weight of them?  
\_\_\_\_\_.
8. If the potato was 6 kg heavier it would be the same weight as the \_\_\_\_\_.