



















Họ và tên: _____







Ngày: _____







Câu 1. Thực hiện phép tính

 + 	$\begin{array}{r} 3 \\ + 2 \\ \hline \end{array}$	 + 	$\begin{array}{r} 6 \\ + 1 \\ \hline \end{array}$	 + 	$\begin{array}{r} 4 \\ + 4 \\ \hline \end{array}$
---	---	---	---	---	---

 + 	$\begin{array}{r} 1 \\ + 4 \\ \hline \end{array}$	 + 	$\begin{array}{r} 3 \\ + 5 \\ \hline \end{array}$	 + 	$\begin{array}{r} 3 \\ + 3 \\ \hline \end{array}$
---	---	---	---	---	---

 + 	$\begin{array}{r} 3 \\ + 4 \\ \hline \end{array}$	 + 	$\begin{array}{r} 2 \\ + 4 \\ \hline \end{array}$	 + 	$\begin{array}{r} 2 \\ + 2 \\ \hline \end{array}$
---	---	---	---	---	---

 + 	$\begin{array}{r} 5 \\ + 2 \\ \hline \end{array}$	 + 	$\begin{array}{r} 5 \\ + 1 \\ \hline \end{array}$	 + 	$\begin{array}{r} 1 \\ + 5 \\ \hline \end{array}$
---	---	---	---	---	---


 + 	$\begin{array}{r} 1 \\ + 1 \\ \hline \end{array}$	 + 	$\begin{array}{r} 2 \\ + 1 \\ \hline \end{array}$	 + 	$\begin{array}{r} 1 \\ + 3 \\ \hline \end{array}$
---	---	---	---	---	---


Câu 2. Thực hiện phép tính


 $5 - 2 = \underline{\quad}$

 $3 - 2 = \underline{\quad}$

 $4 - 1 = \underline{\quad}$

 $6 - 1 = \underline{\quad}$

 $5 - 3 = \underline{\quad}$

 $6 - 2 = \underline{\quad}$

 $5 - 4 = \underline{\quad}$