

UNIDAD EDUCATIVA AGUSTIN FREIRE I

NOMBRE:

FRACCIONES


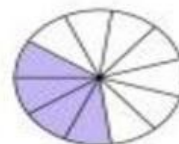
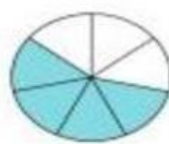
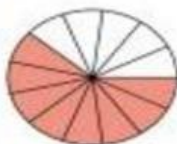

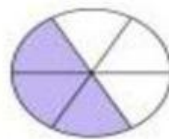
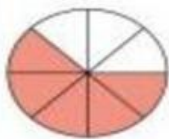
ARRASTRA CADA FRACCION CON SU DIBUJO CORRESPONDIENTE

$$\frac{5}{14}$$

$$\frac{5}{8}$$

$$\frac{9}{12}$$

$$\frac{4}{11}$$



$$\frac{4}{7}$$

$$\frac{8}{13}$$

$$\frac{4}{9}$$

$$\frac{3}{6}$$