
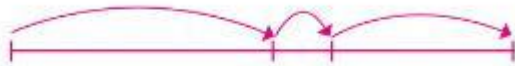



How many hours and minutes are there from 7.53 a.m.

to 10.46 a.m.? _____

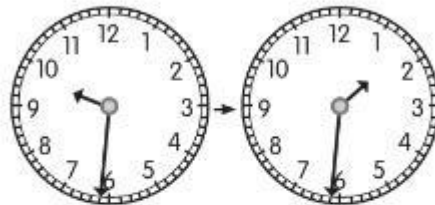


How many hours and minutes are there from 11.12 a.m.


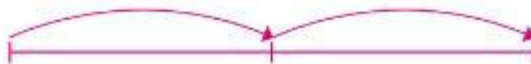
to 3.27 p.m.? _____




How many hours are there from 9.31 p.m. to 1.31 a.m.?



How many minutes are there from 7.45 p.m. to 8.15 p.m.?



(1) Fill in the blanks with the number of minutes.

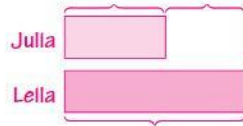


Grace and Gabriel have 185 gift boxes altogether.
Grace has 137 gift boxes.
How many gift boxes does Gabriel have?



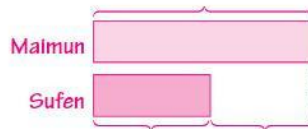
Gabriel has _____ gift boxes.

Julia makes 120 pineapple tarts.
She makes 93 fewer pineapple tarts than Leila.
How many pineapple tarts does Leila make?



Leila makes _____ pineapple tarts.

Maimun ran 352 m.
He ran 168 m further than Sufen.
How far did Sufen run?



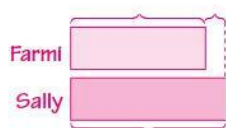
Sufen ran _____ m.

Durian Seller A has 35 kg of durians.
Durian Seller B has 67 kg of durians.
What is the total mass of the durians?



The total mass of the durians is _____ kg.

Farmi weighs 32 kg.
He is 5 kg lighter than Sally.
What is Sally's mass?



Sally's mass is _____ kg.