

MY DISNEY STARS AND HEROES

Level 3

Unit 2 Test

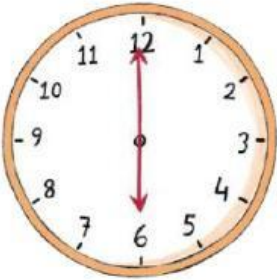
LISTENING

___/6

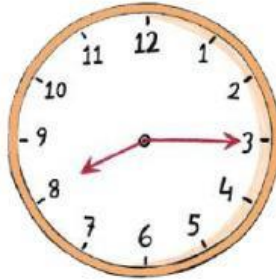
Track 12

Listen and number.

a. 6.00



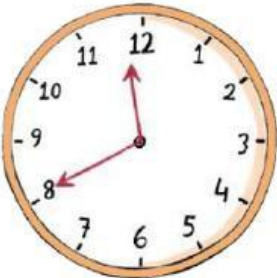
b. 8.15



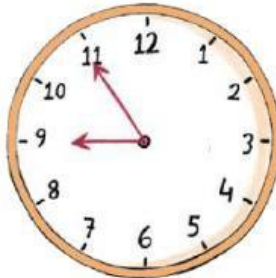
c. 6.30



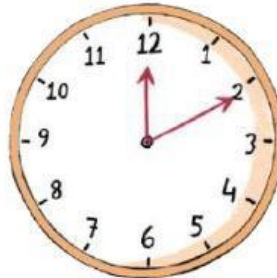
d. 11.40



e. 8.55



f. 12.10



Track 13

Listen and choose "a" or "b".

1.

a



b



2.

a



b



3.

a



b



4.

a



b



Read and choose the correct time.

1. He has Math at nine o'clock.



8.00/9.00

2. Science starts at quarter to ten.



9.15/9.45

3. She has Music at half after ten.



10:30/11:30

4. P.E. finishes at quarter after one.



1:15/1:45

5. History starts at twenty after two.



2:20/2.40

6. He has Art at twenty to four.



3:40/4:20

Read, match and write the subjects.

1.



a. We're learning about countries in _____.

2.



b. I'm painting a picture in _____.

3.



c. I'm thinking about numbers in _____.

4.



d. I'm saying new words in _____.

Read and complete. There are two extra words.

cafeteria sports field library gym computer lab science lab

Kia: Hi, welcome to our school. I'm Kia.

Max: Hi, I'm Max. How do you get to the cafeteria?

Kia: Go straight, then turn right.

Max: Great! How do you get to the computer lab?

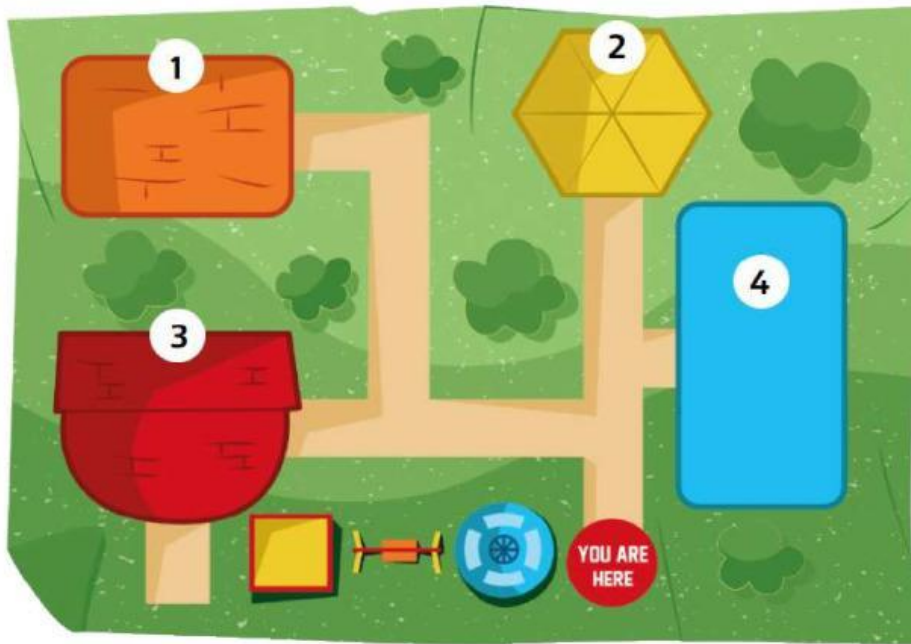
Kia: Turn left, then go straight.

Max: OK. And how do you get to the library?

Kia: Turn left, then turn right, go straight, then turn left.

Max: OK. And finally, how do you get to the gym?

Kia: That's easy. Go straight!



Look and match.

1. What time does history start?

It starts at half after five.

2. What time does P.E. finish?

It finishes at ten to four.

3. What time does science start?

It starts at three o'clock

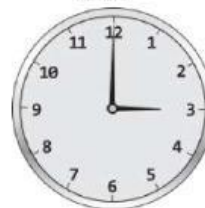
4. What time does music finish?

It finishes at quarter after two

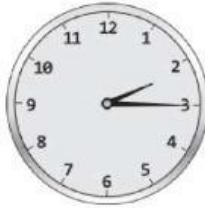
5. What time does art start?

It starts at quarter to eleven

3.00




2.15



10.45



5.30



3.50

