












Check your Mathematics

1. APPLES, PEARS AND BANANAS

In this addition problem, the individual kind of fruit stands for a certain number. Get your brain working and solve the grid by assigning numbers to each fruit.

			$= 10$
			$= ?$
			$= 7$
$= 8$	$= 10$	$= ?$	

- Two counting numbers are four apart. Their sum is 18. What are the numbers?
- I think of a number. If I take away 6 it leaves 9 what is the number?
- Fill in the missing number.

(a) $\underline{\hspace{2cm}}$ 16 8 4

(b) 4 16 $\underline{\hspace{2cm}}$ 256

