













# How to tell the time

## 1. What's the word?

Match the time with the correct picture.

pizza	five o'clock	quarter past five	half past five	quarter to six	five past six
twenty past six	twenty-five past six	twenty-five to seven	twenty to seven	ten to seven	five to seven
					
	pizza				
					

## 2. Fill it in!

Watch the video. Write the missing words in the sentences.

o'clock	time	quarter past	hours	minutes	fives	quarter to	half past
---------	------	--------------	-------	---------	-------	------------	-----------

- Emily is learning how to tell the time.
- The little hand shows us the .
- The big hand shows us the .
- When the big hand is pointing to the twelve, we say it's .
- When the big hand is pointing to the three, we say it's .
- When the big hand is pointing to the six, we say it's .
- When the big hand is pointing to the nine, we say it's .
- For other times, we count the minutes in .