


Solving problems

$$\div \times =$$

Jean, Mary, and Paul have found a lot of delicious apples in the garden. They want to share them equally.

How many apples are there in the garden? ____



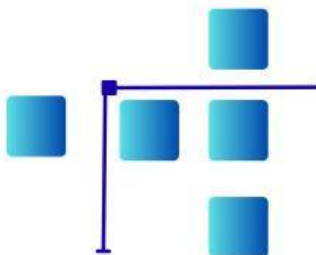
Jean will receive ____ apples.



Mary will receive ____ apples.



Paul will receive ____ apples.

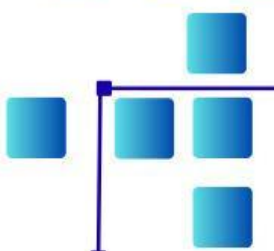


Is there any apple left? ____



SOLVE THE EXERCISE!

For the picnic, Caroline brought a cake with 68 pieces to share among 7 kids.



There are ____ pieces of cake. Each child gets ____ pieces, and ____ are left over.