







Name: _____ Section: _____ Date: _____

Identify the following pictures and write your answer inside the box.

	<div data-bbox="655 448 1370 620"></div>
	<div data-bbox="665 741 1380 913"></div>
	<div data-bbox="668 990 1383 1162"></div>
	<div data-bbox="670 1263 1385 1435"></div>
	<div data-bbox="667 1588 1382 1760"></div>
	<div data-bbox="651 1872 1366 2045"></div>



--



--



--



--



--