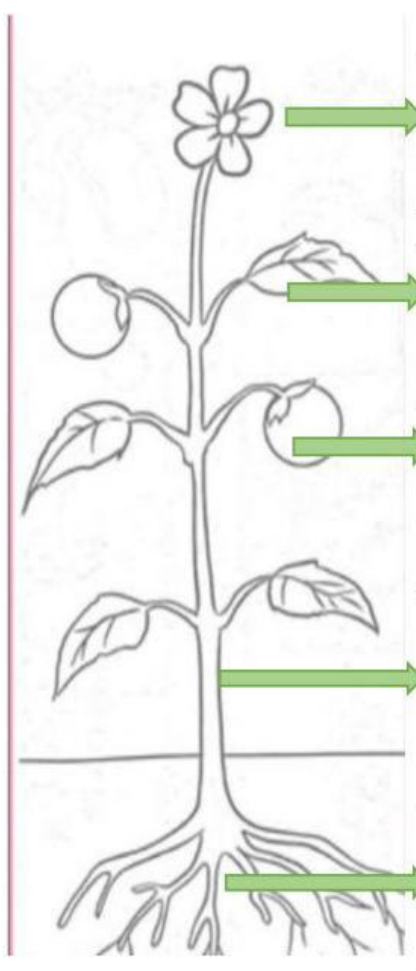


TEST 1 – UNIT 1	AREA/SUB.: Natural Science	TEACHER: Lic. María Victoria Gualoto. Lic. Stefy Proaño	
Name:	Level: 4 th EGB	Date: October 15th, 2025	

1.- Look at the picture and write the parts of the plant and its functions

2



Flower: Produces _____ and attracts _____.

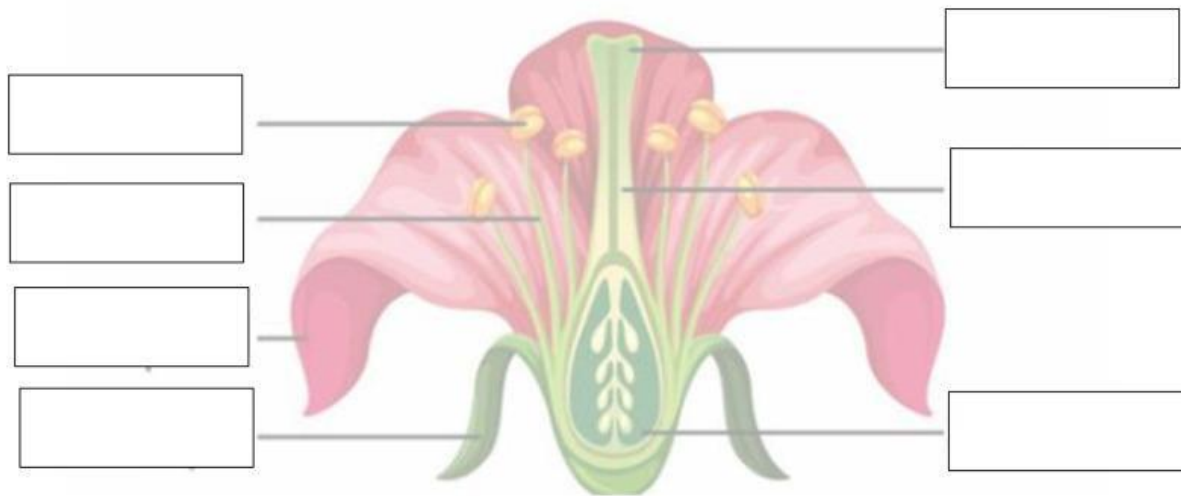
Leaves: Produce _____ for the plant through _____. Allows exchange of _____ and evaporation of _____.

Fruit: protects the _____. Feeds _____ and _____.

Stem: Holds the _____ and transport _____, _____ and _____ to all the parts of the plant.

Roots: absorbs _____, _____ and _____ from the _____.

2.- Look at the picture and write the parts of the flower _____ 2



3.- What are the FEMALE parts of the flower ? Write their names _____ 1

1. _____

2. _____

3. _____

4.- What are the MALE parts of the flower ? Write their names _____ 1

1. _____

2. _____

4.- What is pollination? Complete the definition below _____ 1



Pollination is the _____ of _____ from the _____
to the _____. This process create new seeds.

5.- Why is pollination important? Complete the answer below _____ 1

It is important because it helps _____ to _____.

6.- Number in the correct order the process of pollination _____1

Pollination process:



7.- Write examples of common pollinators _____1

1. _____

2. _____

3. _____

4. _____

