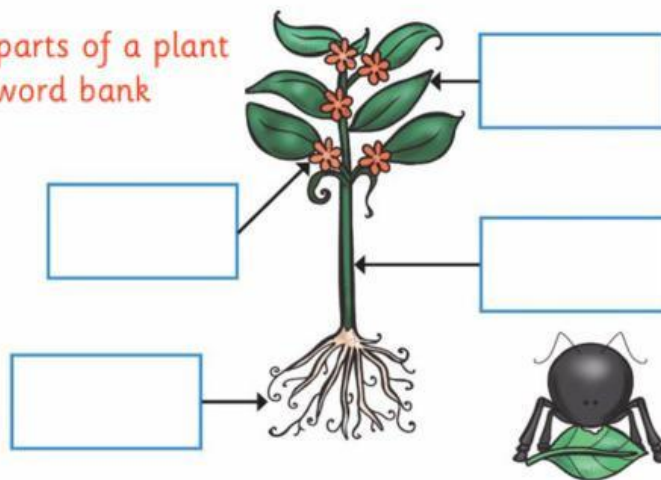


LESSON 5. PARTS OF A PLANT AND THEIR FUNCTIONS

Task 1

Label the parts of a plant using the word bank below.

stem
roots
petal
leaf




KEY WORDS

- Flower (hoa)
- Bud (nụ)
- Stem (thân cây)
- Leaves (lá)
- Roots (rễ cây)

Task 2

Draw the missing plant parts in these pictures.



Type
the
missing
parts

Task 3

Answer the questions.

1. Which part takes in water and minerals from the soil?
2. Which part attracts insects?
3. Which part uses the sun, air, and water to make food?
4. Which part transports water to the leaves?

Task 4: True/ false questions

1. A plant makes its own food using sunlight, air and water. **True / False**
2. Roots grow upwards out of the soil. **True / False**
3. The stem takes water down to the roots. **True / False**
4. Petals are colourful and bright to attract bees. **True / False**

Task 5: The sentences below are all jumbled up. Put the words in the correct order.

1. The / insects / petals / the / attract / to / flower.
.....
2. important / reproduction. / flowers / are / The / for
.....
3. trunk / The / to / transports / the / leaves. / water
.....
4. The / the / stem / connects / roots / leaves. / to / the
.....

Plant Part

Function

Matching




petals

They grow **down** into the **ground**. They **suck up** water and minerals from the **soil**.



leaves

It keeps the plant **upright**. It **takes** water and minerals to **other parts** of the plant.



stem

They use **sun**, **air**, and **water** to make **food**.



roots

They **attract bees**, insects, and birds to take pollen from flower to flower.