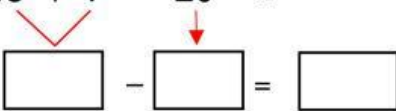

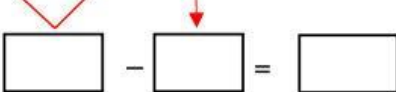
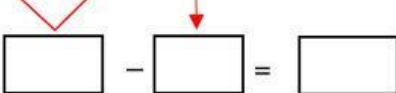


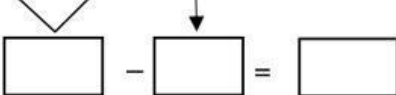
Resuelve las siguientes operaciones combinadas.

1)  $45 + 7 - 20 =$   
  
 -  =

2)  $63 + 16 - 4 =$   
  
 -  =

3)  $50 + 15 - 30 =$   
  
 -  =

4)  $65 + 21 - 70 =$   
  
 -  =

5)  $15 + 23 - 8 =$   
  
 -  =