



Sarasas Witaed Romklao School

Homework Semester 1 Academic Year 2025 Grade 8

Subject: Language

Name: _____ No: _____ Class: _____

Direction: Complete the sentences using the Present Simple Passive form.

1. For a moment he is lost in thought. (**lose**)
2. I am sent from over the sea. (**send**)
3. Of this sister a curious story is told. (**tell**)
4. But you _____ to it. (**not/drive**)
5. I _____ she hasn't. (**tell**)
6. This effect _____ in two different ways. (**produce**)
7. But I _____ to say so. (**bind**)
8. Beautiful views _____ from various parts. (**obtain**)
9. He _____ here the next month. (**expect**)
10. I _____ back to the object of this book. (**bring**)
11. I will not die till I _____. (**hear**)
12. Everybody _____ to it. (**not/call**)
13. The woods _____ with my family. (**fill**)
14. I _____ to bring you into the matter. (**force**)
15. You _____, it seems. (**not/want**)



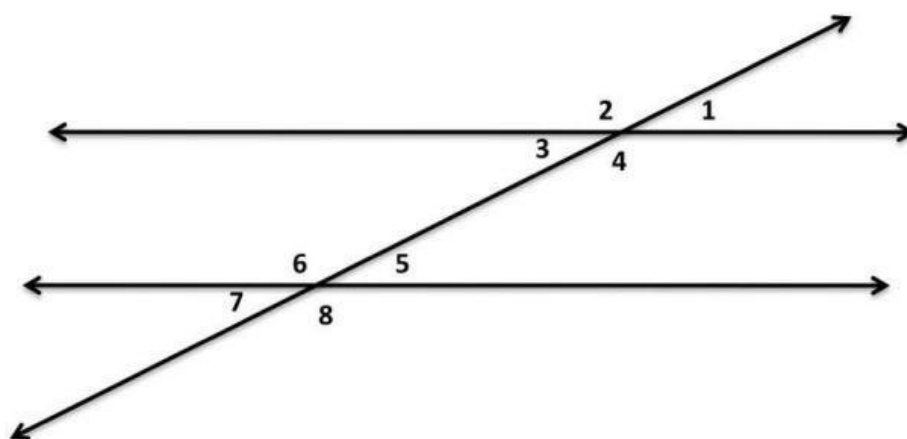
Sarasas Witaed Romklao School

Homework Semester 1 Academic Year 2025 Grade 8

Subject: Mathematics

Name: _____ No: _____ Class: _____

Parallel lines cut by a transversal practice



Decide whether each statement is TRUE or FALSE. If the statement is FALSE, correct the statement.

1. _____ $\angle 1$ and $\angle 2$ are vertical angles.
2. _____ $\angle 1$ and $\angle 5$ are corresponding angles.
3. _____ $\angle 2$ and $\angle 5$ are alternate exterior angles.
4. _____ $\angle 4$ and $\angle 6$ are alternate interior angles.
5. _____ $\angle 7$ and $\angle 2$ are corresponding angles
6. _____ $\angle 3$ and $\angle 6$ are interior angles on the same side of the transversal.
7. _____ $\angle 3$ is congruent to $\angle 8$
8. _____ $\angle 3$ and $\angle 7$ are corresponding angles.
9. _____ $\angle 8$ and $\angle 2$ are alternate exterior angles.
10. If the measure of $\angle 8$ is 112° , find the missing angle measures.




Sarasas Witaed Romklao School


Homework Semester 1 Academic Year 2025 Grade 8


Subject: Science

Name: _____ No: _____ Class: _____

Direction: Label the pictures with the correct words in the box.







1. _____

2. _____

3. _____

solution	solute	solvent
----------	--------	---------

Complete the sentences using the words in the box (one word can use for than once).

1. A solute and a solvent make a _____.
2. Salt is the _____ in saltwater.
3. Water is the _____ in saltwater.
4. Different mineral salts and water make a _____.
5. Different mineral salts are the _____ in mineral water.
6. Water is the _____ in mineral water.
7. Sugar, flavorings, and water make a _____.
8. Sugar and flavorings are the _____ in coca cola.
9. Water is the _____ in coca cola.

solution	solute	solvent
----------	--------	---------



Sarasas Witaed Romklao School

Homework Semester 1 Academic Year 2025 Grade 8

Subject: Social Studies

Name: _____ No: _____ Class: _____

Direction: Read the text "What is map?" and answer the questions.

Maps are flat drawings that show us where to find places. A map always gives us a bird's eye view. That means that map is a drawing of a place from above. Long ago, the first maps were made in the dirt. Now maps are on paper or on computers. There are many different kinds of maps. A world map shows the whole Earth. Some maps can show us small areas like your neighborhood. We use directions on a map. The top of a map is north. The bottom is south. East is to the right. West is to the left.



This map shows a large area of land called a continent. The continent shown is North America. This map also shows large areas of water. They are called oceans.

1. Is a map flat or round?

2. What does it mean to have a bird's eye view?

3. The map on this page shows a large area of land called a continent. What is the name of the continent shown?

4. What are the four directions on a map called? _____, _____, _____, _____