



PRE-PROGRESS TEST MATH



Name _____

PART A: Multiple Choice (Choose the correct answer)




1 What number is **greater**?

- a) 2
- b) 5
- b) 3

2 Which number is **smaller**?

- a) 9
- b) 6
- b) 10

3 Which fruits are equal to 7?

- a) 
- b) 
- c) 




4 Arrange these numbers from **smallest** to **biggest**: 5, 7, 6

- a) 6, 7, 5
- b) 5, 6, 7
- b) 7, 6, 5

5 Arrange these numbers from **biggest** to **smallest**: 9, 6, 7, 9

- a) 6, 8, 7, 9
- b) 9, 8, 6, 7
- b) 9, 8, 7, 6

6 Which animals are the greatest?

- a) 
- b) 
- c) 

7 What number comes **after** 4?

- a) 3
- b) 6
- b) 5

8 What number comes **after** 8?

- a) 9
- b) 7
- b) 10

9 Fill in the blank: 5 ____ 2

- a) <
- b) >
- b) =

10 Fill in the blank: 6 ____ 6

- a) <
- b) >
- b) =



PRE-PROGRESS TEST MATH



Name _____

PART B: Short Answer

- 1 Write the numbers from 1 to 10 in order:

- 2 Fill in the missing numbers:

4, ____, 6, ____, 8, ____, 10

- 3 Arrange from the **smallest** to the **biggest**:

7, 4, 9, 2

- 3 Arrange from the biggest to the smallest:

3, 8, 1, 5

- 3 Compare using $<$, $>$, or $=$

5 ____ 2

8 ____ 8

Teacher's Note

Dear Students,

Don't worry if you make mistakes. This test helps your teacher understand what you still need to practice. Keep up the good work, and let's keep learning with fun!

Miss Fivty