

Resultat: Representa i modela meitats, quarts i vuitens

Pinta només les fraccions que són equivalents a un vuitè:

$$\frac{1}{16}$$

$$\frac{2}{32}$$

$$\frac{1}{8}$$

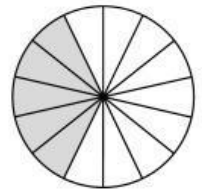
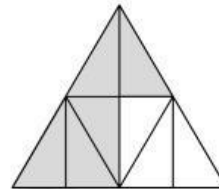
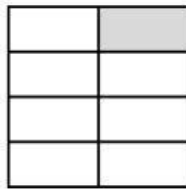
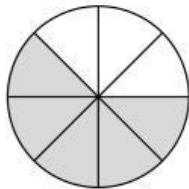

$$\frac{8}{8}$$

$$\frac{2}{16}$$


$$\frac{2}{8}$$

$$\frac{8}{64}$$

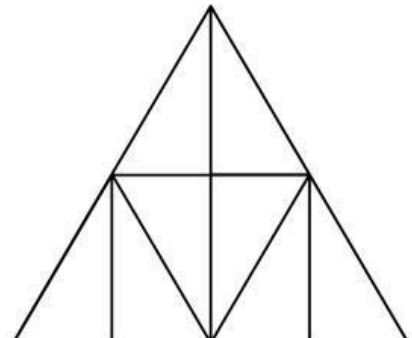
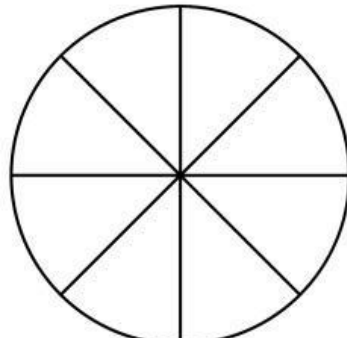
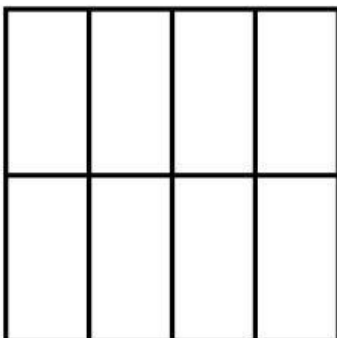
Encercla només les formes on una vuitena part de la forma està ombrejada:



Pinta una vuitena part del nombre total d'ossos:



Pinta una vuitena part de cada forma següent:

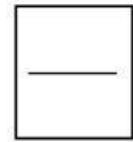



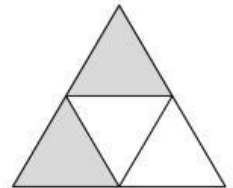
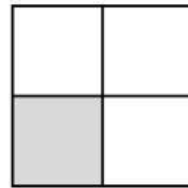
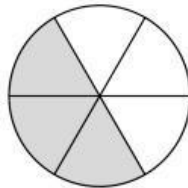
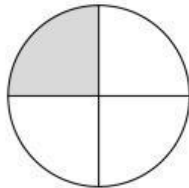
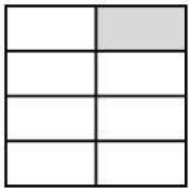


Nom: _____

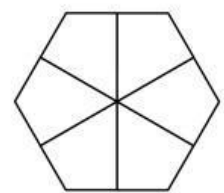
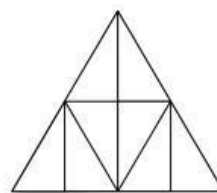
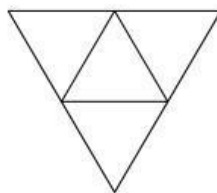
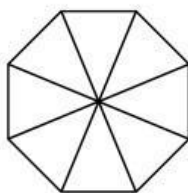
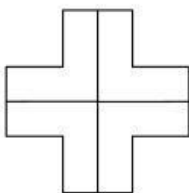
Dta: _____

Resultat: Representa i modela meitats, quarts i vuitens

Escriu la fracció que representa cada part ombrejada de la figura:



Ombreja cada forma segons la fracció:



$$\frac{1}{2}$$

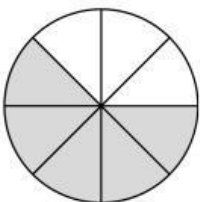
$$\frac{1}{4}$$

$$\frac{2}{4}$$

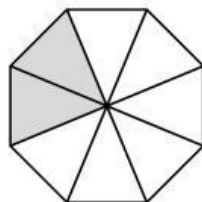
$$\frac{1}{8}$$

$$\frac{1}{2}$$

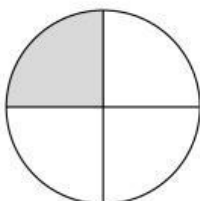
Troba el total de cadascun dels següents problemes de suma:



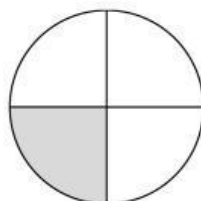
+



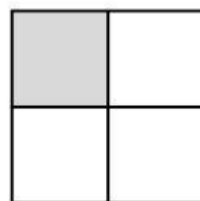
=



+



+



=