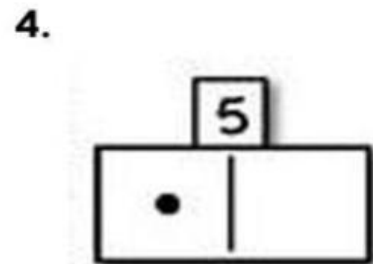
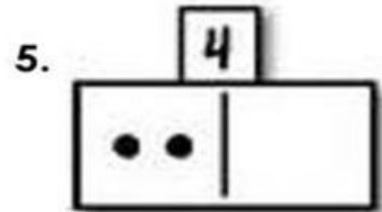
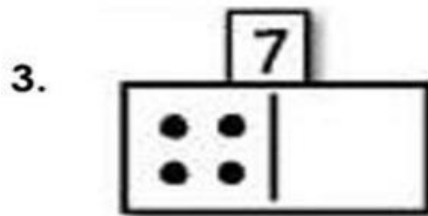
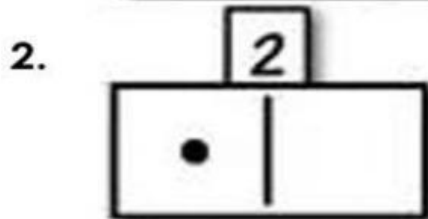
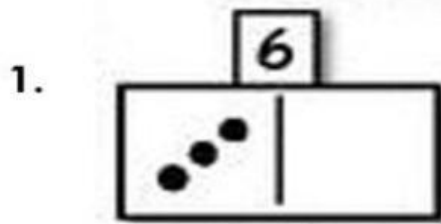


Exercise 1

Decompose each number. Find the missing dot.



Exercise 2

What is the number formed by the numbers below?
Write it on the line.

1. 2 and 3 _____

2. 6 and 1 _____

3. 0 and 9 _____


4. 3 and 3 _____

5. 1 and 7 _____

Exercise 2

Compose each number.

1.



4.



2.



5.



3.

