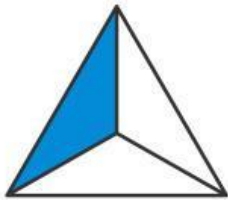


Membandingkan Nilai Pecahan

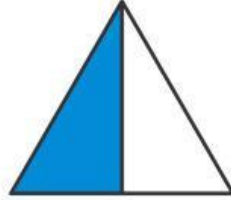
Isilah titik - titik di bawah ini dengan bilangan pecahan yang sesuai dengan gambar serta berikan tanda lebih dari (>) atau kurang dari (<).

Contoh :

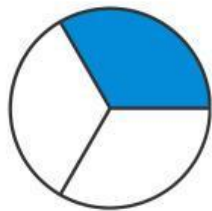


$$\frac{1}{3}$$

<

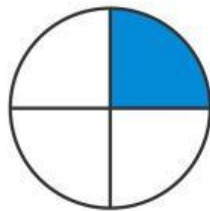


$$\frac{1}{2}$$

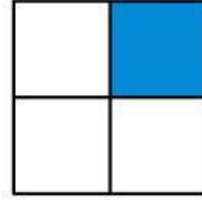


$$\frac{\dots}{\dots}$$

...




$$\frac{\dots}{\dots}$$



$$\frac{\dots}{\dots}$$

...



$$\frac{\dots}{\dots}$$




$$\frac{\dots}{\dots}$$

.....



$$\frac{\dots}{\dots}$$

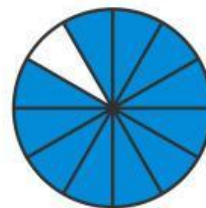


$$\frac{\dots}{\dots}$$

...



$$\frac{\dots}{\dots}$$



$$\frac{\dots}{\dots}$$

.....



$$\frac{\dots}{\dots}$$