






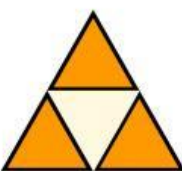



# PECAHAN

Pilih pecahan yang sesuai dengan bagian yang diarsir pada setiap bentuk dari pilihan yang tersedia.

1)		$\frac{1}{6}$	$\frac{3}{4}$	$\frac{2}{4}$	$\frac{3}{6}$	$\frac{2}{6}$
2)		$\frac{2}{7}$	$\frac{3}{8}$	$\frac{4}{7}$	$\frac{1}{5}$	$\frac{5}{7}$
3)		$\frac{3}{5}$	$\frac{4}{5}$	$\frac{5}{6}$	$\frac{3}{5}$	$\frac{4}{6}$
4)		$\frac{6}{8}$	$\frac{5}{6}$	$\frac{6}{4}$	$\frac{5}{8}$	$\frac{4}{6}$
5)		$\frac{1}{6}$	$\frac{2}{6}$	$\frac{2}{7}$	$\frac{3}{6}$	$\frac{2}{5}$
6)		$\frac{3}{8}$	$\frac{2}{6}$	$\frac{3}{3}$	$\frac{2}{8}$	$\frac{3}{6}$
7)		$\frac{1}{2}$	$\frac{2}{3}$	$\frac{1}{3}$	$\frac{2}{2}$	$\frac{2}{4}$
8)		$\frac{3}{4}$	$\frac{1}{3}$	$\frac{2}{3}$	$\frac{2}{4}$	$\frac{3}{3}$
9)		$\frac{4}{8}$	$\frac{5}{7}$	$\frac{2}{8}$	$\frac{3}{7}$	$\frac{2}{7}$