

IIIS Nat 5 Revision 2

The three main chords in a piece of music are chords I, IV and V.




1. Fill in the grid below to indicate the chords in each of the following keys

	I	IV	V
C major			
F major			
G major			

2. What is an **ANACRUSIS**?

3. What is another name for an anacrusis?

4. Which of these 4 tunes has an **anacrusis**?



8. Name this type of bass line:



Alberti bass

Pedal

Ground bass

Walking bass

9. Name this type of bass line:



Alberti bass

Pedal

Ground bass

Walking bass

10. Name this concept



Anacrusis

Inverted Pedal

Pedal

Ground bass

11. Name these keys



12. Which of these Italian terms means 'slow tempo'?

Allegro

Moderato

Vivace

Adagio

13. Which of these Italian terms means 'medium tempo'?

Allegro

Moderato

Vivace

Adagio

14. Which of these Italian terms means 'fast tempo'?

Allegro

Moderato

Vivace

Adagio

15. a) Name the following notes:



b) What chord do these notes belong to?

16. Name the chord outlined by each of the bracketed notes



17. The **alberti bass** was particularly common in which musical period?

Baroque

Classical

Romantic

20th century

18. Can you name a famous composer from this musical period?

19. What is an inverted pedal?

20. What is a pedal?

21. What is an alberti bass?

22. What is a ground bass?