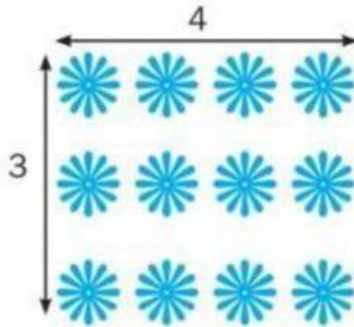


UNIT 1: WHOLE NUMBERS

Lesson 3: Multiplication and division

1. Look and write multiplication.

How many flowers are there?



$$3 \times 4 = 12$$


How many umbrellas are there?




How many leafs are there?



How many bulbs are there?



How many insects are there?



How many ants are there?



2. Complete the table.

| Operation | Word form |
|-------------------|----------------------------------|
| a. $15 : 3 = 5$ | <i>15 divided by 3 equals 5.</i> |
| b. $3 \times 4 =$ | |
| c. | 10 divided by 2 equals |
| d. $2 \times 3 =$ | |
| e. | 14 divided by 2 equals |
| f. $2 \times 8 =$ | |

3. There are 4 boxes of oranges. Mary puts 5 oranges into each box. How many oranges are there in total?

The number of oranges is:

.....

Answer: There are oranges.

