



Получасовая гонка



Посмотри на время на часах. Проведи линию от времени к правильному циферблату.




It's half past 11 a.m.



It's half past 2 p.m.




It's half past 5 p.m.



It's half past 7 p.m.




It's half past 12 p.m.



It's half past 3 p.m.



It's half past 9 a.m.



It's half past 4 p.m.




It's half past 1 p.m.



It's half past 8 p.m.



It's half past 10 a.m.



It's half past 6 a.m.

