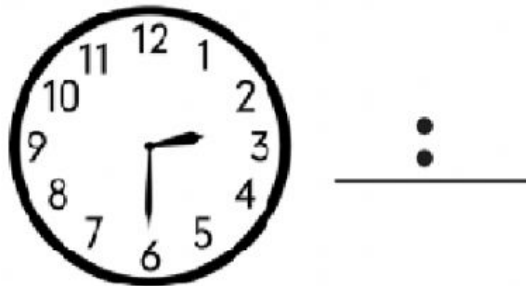


Cluster 7 Task 1




a)  What time is it? _____

Write the time next to the clock



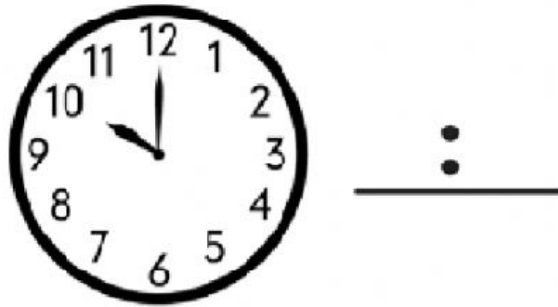
b)  What time is it? _____

Write the time next to the clock



c)  What time is it? _____

Write the time next to the clock



d)  What time is it? _____

Write the time next to the clock

