

E - LKPD

MATEMATIKA

KELAS VII

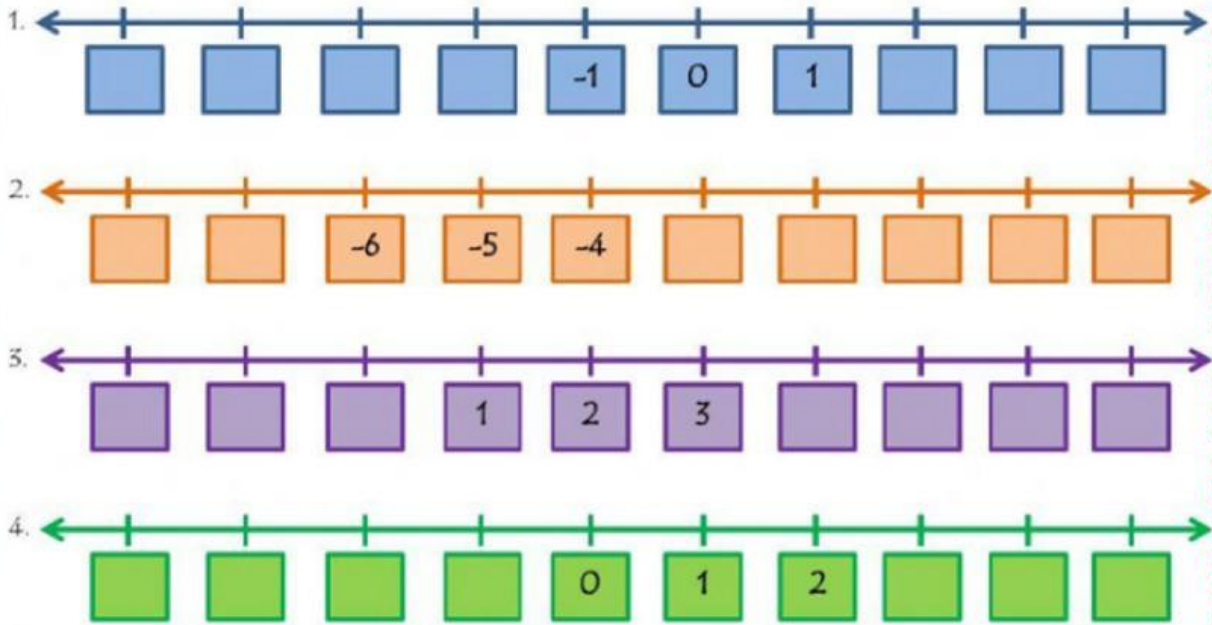
Disusun Oleh :

Anna Afriany, S.Si.,Gr



BILANGAN BULAT

Lengkapilah garis bilangan berikut dengan mengklik anak panah dan pilih bilangan yang benar!



2. Isilah titik-titik dengan tanda $<$, $>$, atau $=$!

$$5 \dots -5$$

$$-9 \dots -4$$

$$-24 \dots 24$$

$$0 \dots -10$$

$$-25 \dots -85$$

$$-392 \dots 195$$

3. Tuliskan bilangan bulat yang lebih dari -3 tetapi kurang dari 4 secara berurutan!

4. Tuliskan urutan bilangan bulat dari yang terkecil

$$(-12, 8, 10, 0, -6, 9) = \text{...} \text{...} \text{...} \text{...} \text{...} \text{...}$$

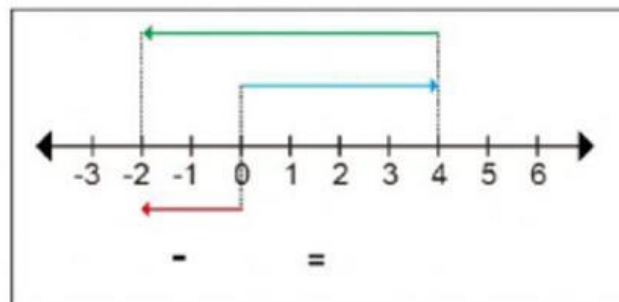
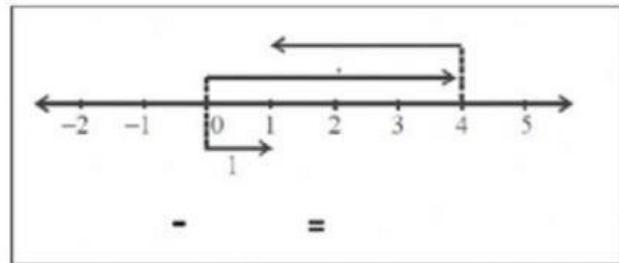
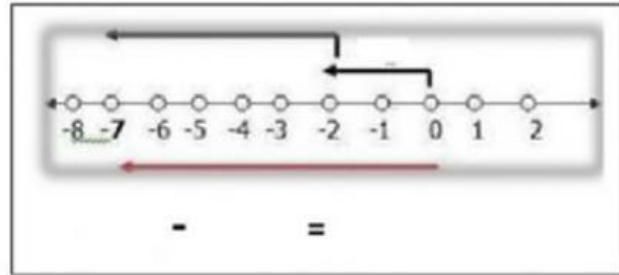
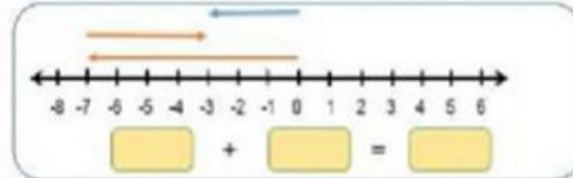
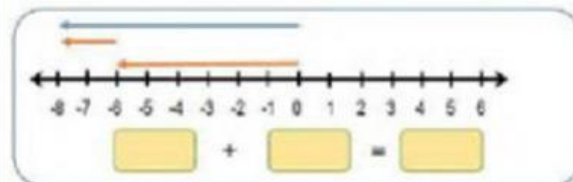
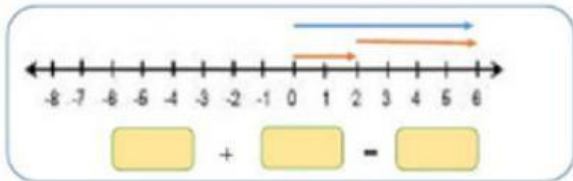
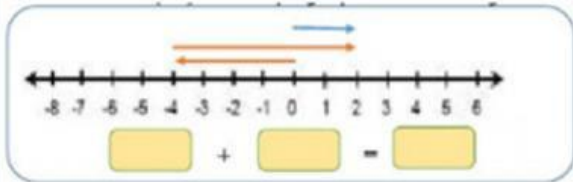
$$(-23, 32, -33, 26, 35, -6) = \text{...} \text{...} \text{...} \text{...} \text{...} \text{...}$$

5. Tuliskan urutan bilangan bulat dari yang terbesar

$$(12, -21, 8, -13, 14, -50) = \text{...} \text{...} \text{...} \text{...} \text{...} \text{...}$$

$$(19, -28, 36, -45, 8, -15) = \text{...} \text{...} \text{...} \text{...} \text{...} \text{...}$$

Tuliskan kalimat matematika yang tepat berdasarkan garis bilangan berikut!



Jodohkanlah soal berikut dengan jawaban yang benar !

- | | |
|---------------------------|----------------------------------|
| 1. $8 + (-5) = \dots$ | <input type="text" value="-3"/> |
| 2. $(-8) + 5 = \dots$ | <input type="text" value="-13"/> |
| 3. $(-8) + (-5) = \dots$ | <input type="text" value="3"/> |
| 4. $3 + (-12) = \dots$ | <input type="text" value="9"/> |
| 5. $(-3) + 12 = \dots$ | <input type="text" value="-15"/> |
| 6. $(-3) + (-12) = \dots$ | <input type="text" value="-9"/> |

- | | |
|----------------------------|----------------------------------|
| 7. $7 - (-2) = \dots$ | <input type="text" value="10"/> |
| 8. $(-7) - 2 = \dots$ | <input type="text" value="-20"/> |
| 9. $(-7) - (-2) = \dots$ | <input type="text" value="-12"/> |
| 10. $6 - (-4) = \dots$ | <input type="text" value="9"/> |
| 11. $(-16) - 4 = \dots$ | <input type="text" value="-5"/> |
| 12. $(-16) - (-4) = \dots$ | <input type="text" value="-9"/> |

- | | |
|-----------------------------|----------------------------------|
| 13. $5 + 14 - (-3) = \dots$ | <input type="text" value="-12"/> |
| 14. $(-15) - 4 + 3 = \dots$ | <input type="text" value="22"/> |
| 15. $5 + (-4) - 13 = \dots$ | <input type="text" value="-16"/> |



5	x	4	=		8	x	9	=			x	4	=		
		x			x					x				x	
1		3				x	2	=		8	x		=		
x		=			=			x		=		x		=	
		x	2	=		12	x		=			18			192
=				x		x		=				=			
7	x		=	14		9				12	x		=		
				=		=						x			5
	x	7	=		19					5	x	5	=		
x					x					x		=		=	
4		5				x	9	=	18		x	2	=		
=		x			=		x		=			x			
	x	2	=			15				10	x	5	=		
		=				=				x		=			
		x	4	=						2	x		=		

