










Name: _____

Grade: _____

2nd Quarter**Math 1 – Lesson 1: ONE MORE THAN**

A. Put an X on the picture that has one more than the number it shows.

3			
14			
22			

B. Write the number that is one more than the given number.

Number	One more	Number	One more
8		57	
34		49	
17		63	
23		88	
10		91	

C. Fill in the blank.

1. One more than 15 is _____

3. One more than 78 is _____

2. One more than 29 is _____

4. One more than 56 is _____