


பெயர்:

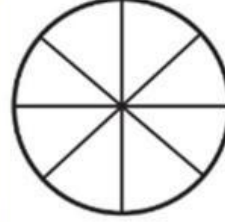
V- STD -MATHS

5.1

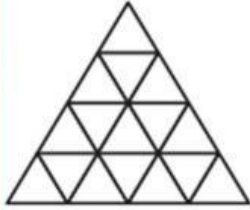
Colour the pictures according to the fractions and write the sum.



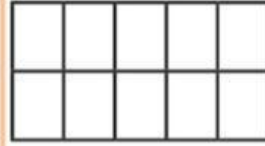
$$\frac{1}{4} + \frac{2}{4} = \frac{3}{4}$$



$$\frac{3}{8} + \frac{5}{8} = \boxed{\quad}$$



$$\frac{7}{16} + \frac{4}{16} = \boxed{\quad}$$



$$\frac{5}{10} + \frac{4}{10} = \boxed{\quad}$$

5.2

Observe the picture and find the answer.

Kumar ate  pieces, Mary ate  pieces and Abdullah ate  pieces of  chocolate.

- Fraction of chocolate pieces eaten by Kumar is \_\_\_\_\_.
- Fraction of chocolate pieces eaten by Mary is \_\_\_\_\_.
- Fraction of chocolate pieces eaten by Abdullah is \_\_\_\_\_.
- Fraction of chocolate pieces eaten by all three of them is \_\_\_\_\_.
- Fraction of the remaining chocolate pieces is \_\_\_\_\_.