

# Worksheet 3

## Relating division to the 5 times table

1 Fill in the boxes.

$2 \times 5 =$

$\div 5 = 2$

$3 \times 5 =$

$\div 5 = 3$

$8 \times 5 =$

$\div 5 = 8$

$7 \times 5 =$


$\div 5 = 7$

$10 \times 5 =$

$\div 5 = 10$




$6 \times 5 =$

$\div 5 = 6$



2 Write the answers in the boxes.

(a)






5 groups of 6 =

$5 \times 6 =$

$\div 5 = 6$

(b)




3 groups of 5 =

$3 \times 5 =$

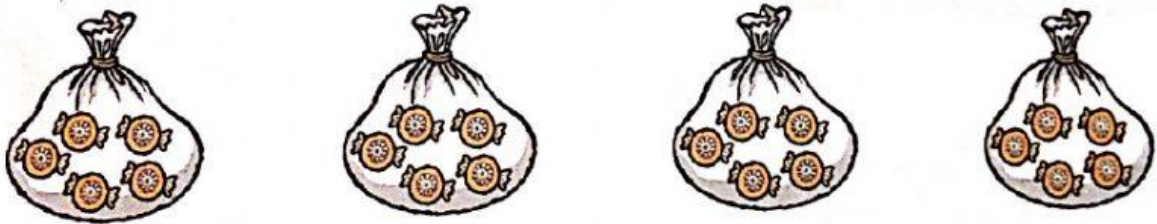
$\div 5 = 3$

**Worksheet 4****Dividing a number by 5.**

- 1 Draw 10 circles below such that each box has the same number of circles.



- 2 Write one division sentence for the picture below.



$$\boxed{\phantom{00}} \div 5 = \boxed{\phantom{00}}$$

- 3 Write a division sentence.

$$\begin{array}{r} 8 \\ \div 5 = 40 \end{array}$$

4 Match.

