




Name: _____

Score: _____

Tally Tommy's Bakery Trip

Tally Tommy and his friends bought some donuts, cupcakes and cookies. Draw tally marks to show the number of items in each kind and answer the questions.



Bakery Items	Tally Items
 Cookies	
 Cupcake	
 Donuts	

- Which item has the fewest in number? _____
- How many more donuts did they buy than cupcakes? _____
- Which items counts more than 8? _____
- How many items are there in all? _____



Created by: Abijah Ali & Diana Lalchan
Cupcakes and sprinkles!