



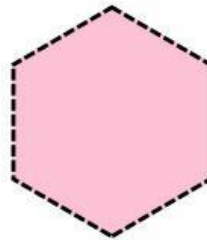



ACTIVIDAD DE MATEMÁTICAS

Nombre:

Fecha:

1: Recorta las figuras geométricas y pega donde corresponda



cuadrado

rombo

círculo

triángulo

pentágono


rectángulo

octágono


hexágono

ACTIVIDAD DE MATEMÁTICAS


2: Colocar las figuras geométricas en el casillero correspondiente




rombo




rectángulo




hexágono



triángulo



pentágono



octágono



círculo



cuadrado