










Name: _____

EASTER TERM TEST 2021.

AGRI/HEALTH/SCIENCE

A. FORCES

Look at the pictures below. Fill in the force being used.

Pushing	Pulling	Squeezing
 _____	 _____	 _____
 _____	 _____	 _____
 _____	 _____	 _____
 _____	 _____	 _____

B. SCIENTIST

Match the name of the Scientist to the contributions they made.

Dr. Rudranath Capildeo

Dr. Dolly Nicholas

Courtenay Bartholomew

Dr. Joseph Pawan

1. First person to show that rabies could spread by vampire bats to other animals and humans.

2. Invented a range of paints and adhesive.

3. Diagnosed the first case of AIDS in the English Speaking Caribbean. _____

C. True or False.

Write T for true if the statement is **true** or **F for false** if the statement is **False** on the lines.

1. Insects have eight legs. _____

2. Scientists observe, test and study. _____

3. Solids have a definite shape. _____

4. Liquids can not form drops. _____

5. Matter is everywhere. _____

D. Use a word from the box below to complete the sentences.

underground	hatchery	layers
above ground	nursery	boil
broilers	fresh water	

1. Seedlings are prepared in _____.

2. Leafy vegetables grow _____.
3. Root vegetables grow _____.
4. Another word for pasteurize is _____.
5. Birds reared for their eggs are called _____.
6. Birds reared for their meat are called _____.
7. Baby chicks can be bought at a _____.
8. Aquaculture farmers rear _____ fishes.