


II STD MATHS TERM-1

$$5 \times 3 = 15$$

Answer the following questions.


- 1 Write the name of the shape obtained on imprinting the given 3D shape.



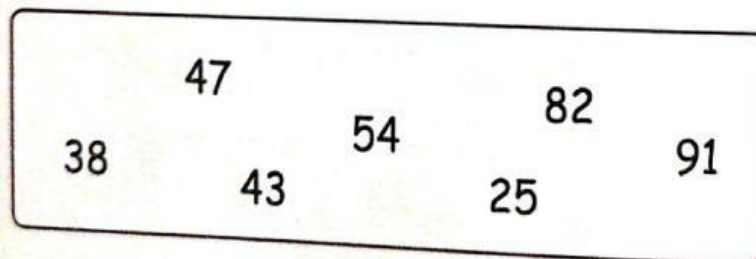
- 2 89 can also be written as...

- a) $8 + 9$
- b) $80 + 9$
- c) $90 + 8$
- d) $9 + 8$

- 3 Write the number name which has 7 Tens and 8 Ones.



- 4 Circle the odd numbers



- 5 Write the number of vegetables and its predecessor and successor.



Number of vegetables

Predecessor

Successor