

Picture Graphs

Name : _____

Watch The Video



Class Pets	
dog 🐕	🐕 🐕 🐕 🐕 🐕 🐕 🐕 🐕 🐕 🐕
cat 🐱	🐱 🐱 🐱 🐱
goldfish 🐟	🐟 🐟 🐟 🐟 🐟

How many students have goldfish 🐟?

Our Favorite Fruits	
apple 🍏	🍏 🍏 🍏 🍏 🍏 🍏 🍏
grapes 🍇	🍇 🍇 🍇 🍇 🍇 🍇 🍇 🍇
pineapple 🍍	🍍 🍍 🍍 🍍 🍍 🍍 🍍 🍍 🍍 🍍

How many fewer kids voted for apples 🍏 than pineapples 🍍?

Answer: kids

Class Pets	
dog 🐶	🐶 🐶 🐶 🐶 🐶 🐶 🐶 🐶 🐶
cat 🐱	🐱 🐱 🐱 🐱
goldfish 🐟	🐟 🐟 🐟 🐟 🐟

How many students have pets in all?


19

18

Our Favorite Vegetables	
carrots 🥕	🥕 🥕 🥕 🥕 🥕 🥕 🥕 🥕 🥕
corn 🌽	🌽 🌽 🌽 🌽
broccoli 🥦	🥦 🥦 🥦

How many kids voted for broccoli 🥦?

Answer: kids






Which vegetable had the least votes?

corn



























broccoli



How many fewer kids voted for broccoli  than carrots  ?





















Answer: kids


Our Favorite Sports	
baseball 	      
hockey 	       
football 	     

How many kids voted in all?

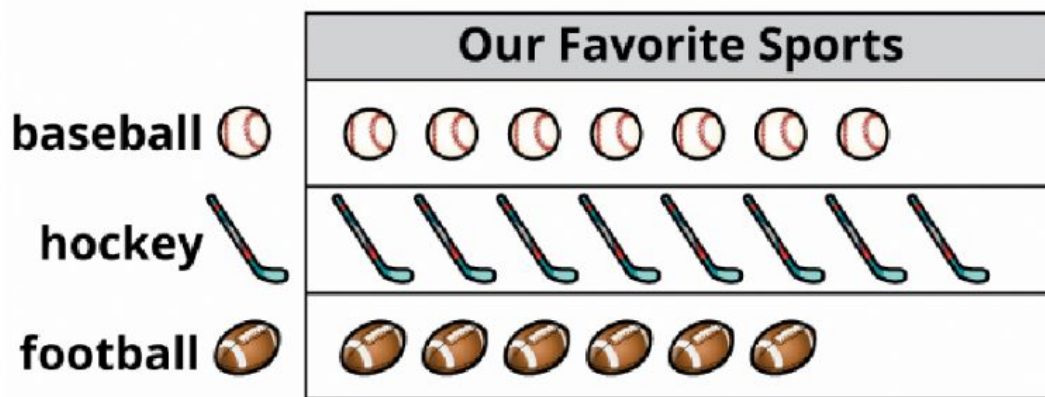
20

21

Ways We Get to School	
walk 	    
car 	       
bus 	   

How many students take the bus  to school?


Answer: students




Which sport had the least votes?

baseball 

football 



How many kids voted for grapes  ?

7

8