

Họ và tên:

Môn: Tiếng Anh - Thời gian: 75 phút

Lớp

Khối 2 – Lớp Song Ngữ




Năm học : 2025 - 2026

MÃ ĐỀ : 01





LISTENING (30 pts)	READING - WRITING (50 pts)	SPEAKING (20 pts)	TOTAL	MATHS	GPA

PART I: LISTENING (30 pts)





Task 1 : Listen and circle. (10 pts)

1			
2			
3			
4			

Task 2 : Listen and tick (✓) or cross (×) (10pts)

1. 	2. 	3. 	4. 
<input type="checkbox"/>	<input type="checkbox"/>	<input type="checkbox"/>	<input type="checkbox"/>

Task 3 : Listen and numbers (10 pts)

			
<input type="text"/>	<input type="text"/>	<input type="text"/>	<input type="text"/>

PART II : READING & WRITING (50 pts)

Task 1 : Reorder the words (10 pts)

1. chicken / I / like / milk . / and

-->

2. is / riding / He / a / bike .

-->

3. yummy. / is / The / pizza /

-->

4. can / a / I / see / window.

-->

5 . name ? / What / is / your

-->

Task 2 : Look , read and circle . (10 pts)

1. How old are you ?

A. I'm fine .

B. I'm good .

C. I'm Nam.

D. I'm seven.

2. Let's look at the _____.



A. sand

B. sun

C. sail

D. sea

3. There are _____ cars.



A. eight

B. nine

C. ten

D. eleven

4. It's a _____



A. triangle

B. circle

C. rectangle

D. square



5. This is my _____

A. mother

B. father






C. grandmother

D. brother

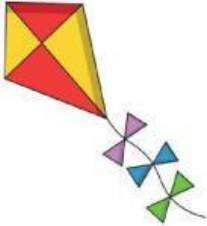




Task 3 : Read and draw lines. (10 pts)

1. What's your name ?	A. It's number fourteen.
2. How many books ?	B. I can see a teddy bear.
3. What can you see ?	C. There are five books .
4. Is he flying a kite ?	D. My name is Kevin.
5. What number is it ?	E. No, he isn't.
1-.....	2-.....
3-.....	4-.....
5-....	

Task 4 : Unscramble the words. (10 pts)

				
ikbe	ecak	twaer	edlonso	lenvee
_____	_____	_____	_____	_____

Task 5 : Read and put a tick (✓) or cross (×) (10 pts)

				
This is a kite. <input type="checkbox"/>	I'm sad. <input type="checkbox"/>	It's a star. <input type="checkbox"/>	I'm seven. <input type="checkbox"/>	This is an apple. <input type="checkbox"/>

PART III: SPEAKING (20 points) (phần này không làm)

PART 1 (10pts)				
1	2	3	4	5

PART 2 (10pts)				
1	2	3	4	5

MATH IN ENGLISH

Task 1 : Circle the correct answer. (20 pts)

1	It's number twenty.	12	20	25
2	It's number forty.	13	30	40
3	14 is greater than ____.	17	19	11
4	_____ is less than sixteen.	19	16	15
5	Ten, twenty , _____ forty, fifty.	20	30	40

Task 2 : Look, read and circle A,B,C or D. (20 pts)

1. 11+2=?

A. fourteen

B. threeteen

C. fifteen

D. thirteen

2. $19 - 5 = ?$

- A. four B. fourteen C. fourteen D. eleven

3. $80 \dots\dots 91$

- A. is equal to B. is greater than C. equal to D. is less than

4. $\text{Eighteen} \dots\dots \text{six equals twelve.}$

- A. plus B. minus C. equal D. equal to

5. $\text{Nine plus three equals} \dots\dots$

- A. twenty B. twelve C. thirteen D. five

6. $\text{Eighteen is} \dots\dots \text{seventeen.}$

- A. equals B. greater than C. equal to D. less than

7. $\text{Sixteen is less than} \dots\dots$

- A. twenty B. fourteen C. sixteen D. thirteen

8. $\text{Three is} \dots\dots \text{three.}$

- A. plus B. equals C. equals to D. equal to

9. $18 \dots\dots 81$

- A. is greater than B. is equal to C. is less than D. equals

10. $17 - 5 + 3 = ?$

- A. eighteen B. fifteen C. fifteen D. thirteen

Task 3 : Read and write (20 pts)

Leo has 18 cookies. Leo eats 5 cookies and Leo gave Bella 3 cookies .

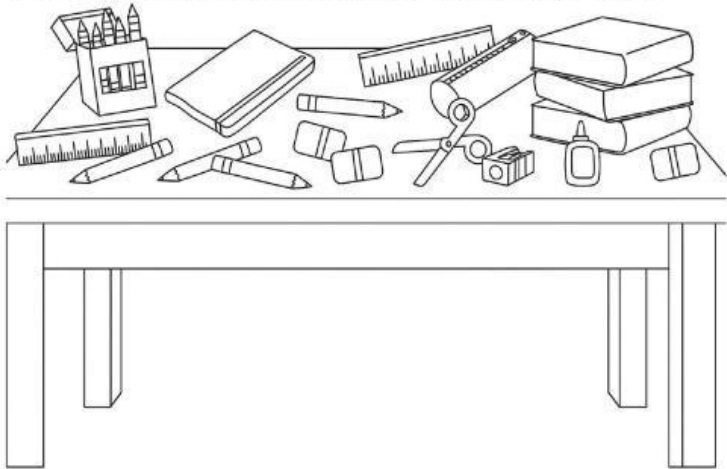
How many cookies does Leo have left ?

$$\square \bigcirc \square \bigcirc \square = \square$$

There are..... cookies left.

Task 4 : Look, count and write . (20 pts)

(Write the numbers in words : *Viết số bằng chữ*)



0. Example : There is one glue.

1. There are _____ books.

2. There are _____ rulers.

3. There are _____ erasers.

4. There are _____ crayons.

5. There are _____ pencils.

Task 5: Read and write (20 pts)

Harry has 6 books . His mother gives him 9 more books.

How many books does Harry have now ?

$$\square \bigcirc \square = \square$$

There arebooks in all.

GOOD LUCK !