


# NUMBERS WORKSHEET

NAMA : .....

GRADE 3

1. How many apples are there?





- a. six
- b. four
- c. five

2. I have ..... carrots



3. Eight is more than ten

- a. true
- b. false

5. What is 4  + 3  = 