


B. Circle the correct answer from numbers written below. One has been done for you :




$$3 - 0$$

3 2 1



$$12 - 8$$

4 5 6



$$9 - 7$$

2 1 3




$$6 - 1$$

4 5 3



$$12 - 11$$

1 2 0




$$7 - 5$$

1 2 3




$$11 - 2$$

8 9 10



$$8 - 4$$

3 4 5



$$9 - 7$$

2 1 3