

INSPIRED TOTS EARLY LEARNING CENTER
SECOND TERM ASSESSMENT 2023/2024 SESSION

Subject: Quantitative Reasoning

Class: 4th Grade

INSTRUCTION: Write the missing numbers in the boxes below.

Sample

7	8
10	32
3	4

2)

3	17
22	153
19	

4)

14	13
28	
14	13

Sample

6	4
0	3

$(6 \times 4) - (0 + 3) = 21$

1)

	3
72	36
23	12

3)

140	
230	153
90	17

5)

92	35
	560
41	16

6)

45	2
	18
	27

7)

18	5
	12
68	

9)

15	
	5
40	0

8)

17	6
5	14

10)

	5
	1
10	9

INSPIRED TOTS EARLY LEARNING CENTER
SECOND TERM ASSESSMENT 2023/2024 SESSION

Sample

0		6	11)	12		4
	48				200	
8		9		?		15
$(6 \times 8) + (0 \times 9) = 48$						

12)

17		?	13)	11		
	100				188	
3		3		9		13

14)

$\frac{3}{4}$		$\frac{1}{2}$	15)	3		5
	?				44	
$\frac{1}{2}$		$\frac{1}{6}$?		3

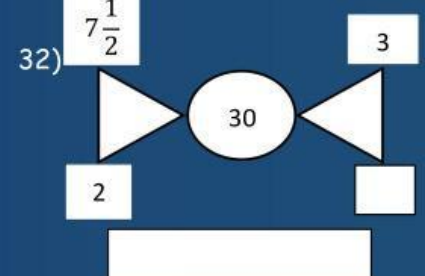
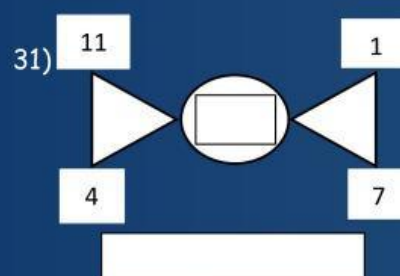
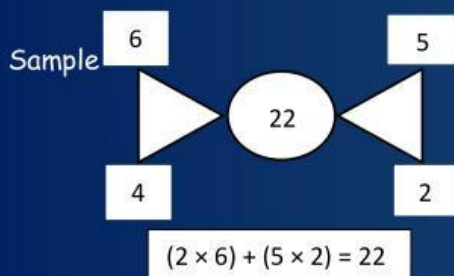
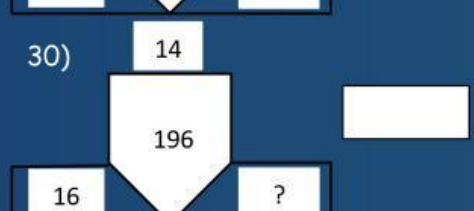
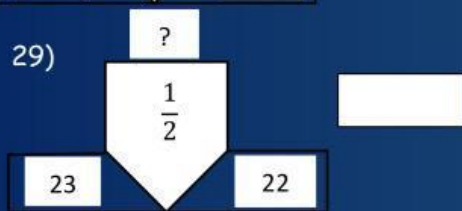
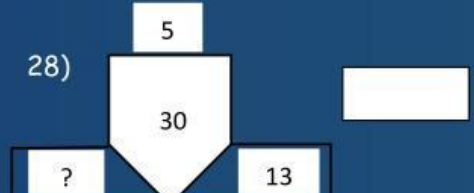
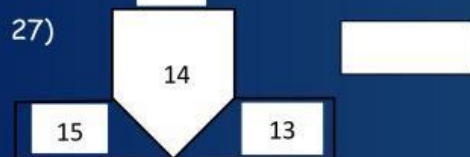
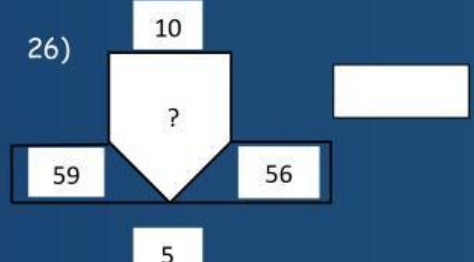
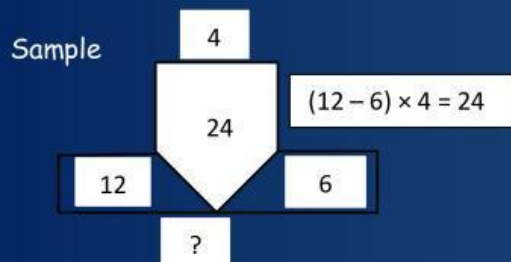
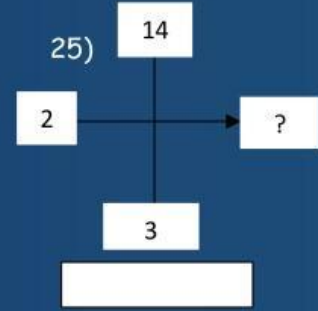
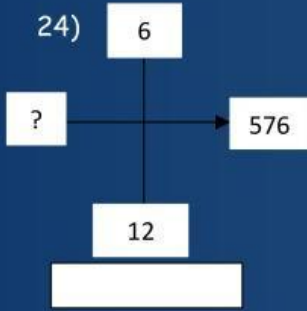
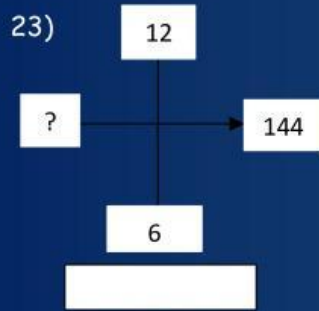
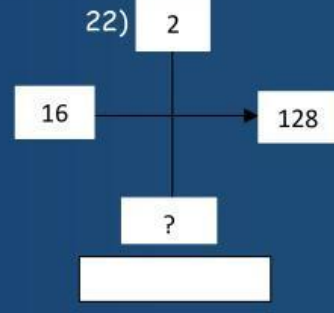
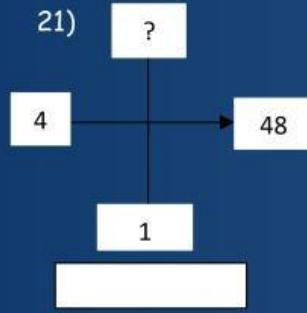
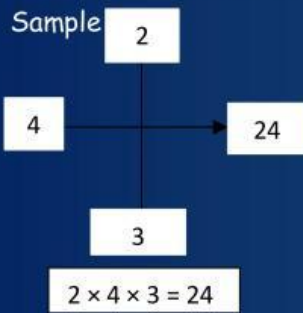
Sample

4	7		16)	0	$2\frac{1}{2}$		17)		2
22							18		
$(4 + 7) \times 2 = 22$									

18)

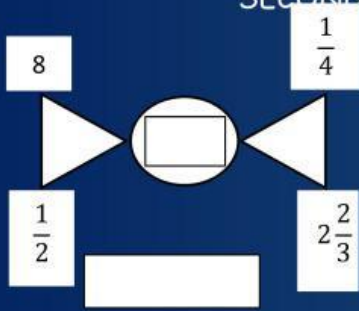
54	18		19)	12			20)	$\frac{1}{4}$	$\frac{1}{2}$
				54					

INSPIRED TOTS EARLY LEARNING CENTER
SECOND TERM ASSESSMENT 2023/2024 SESSION

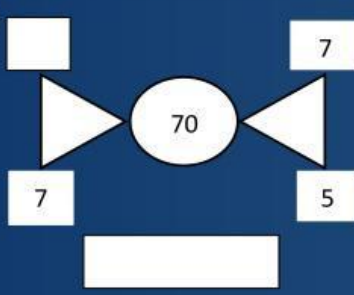


INSPIRED TOTS EARLY LEARNING CENTER
SECOND TERM ASSESSMENT 2023/2024 SESSION

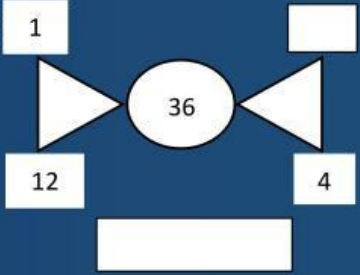
33)



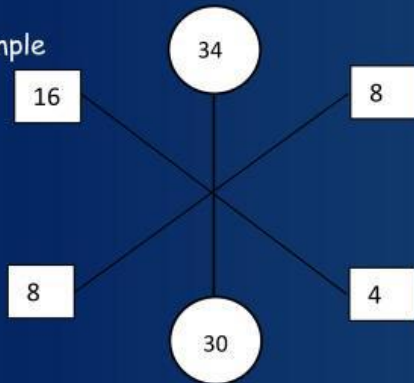
34)



35)

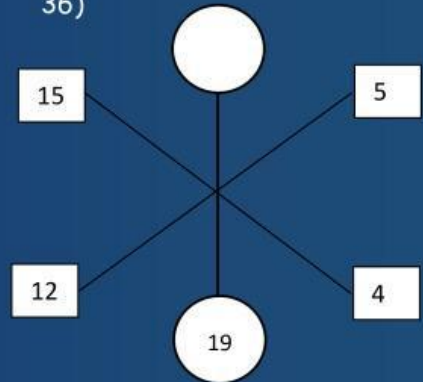


sample

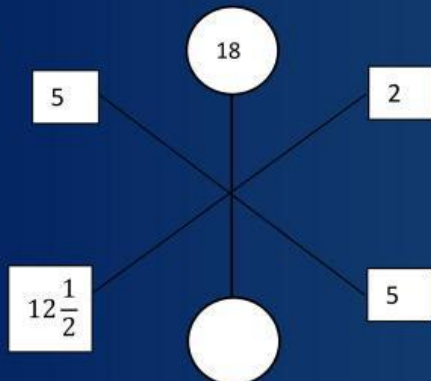


$$34 + 30 = 8 \times 8 = 16 \times 4 = 64$$

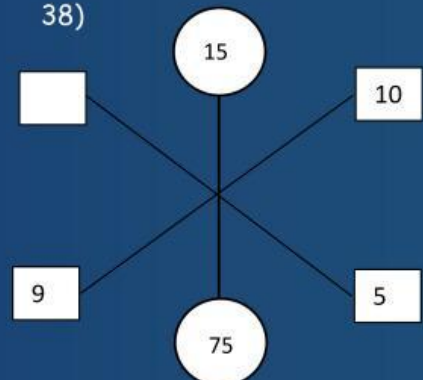
36)



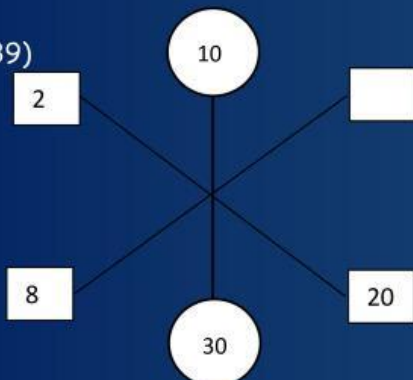
37)



38)



39)



40)

